

Name : \_\_\_\_\_

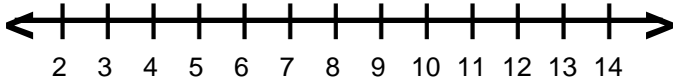
Score : \_\_\_\_\_

Teacher : \_\_\_\_\_

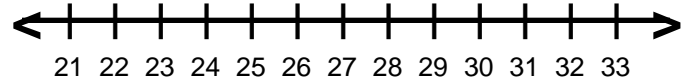
Date : \_\_\_\_\_

## Solve and Graph the Inequalities

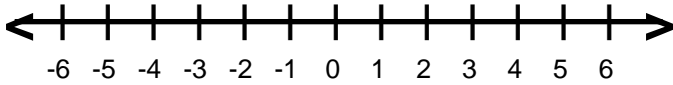
1)  $-70 \geq -7c$



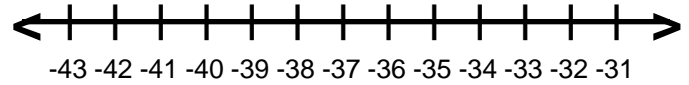
6)  $\frac{g}{5} > 5$



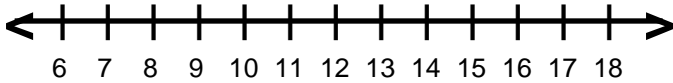
2)  $12 > -3q$



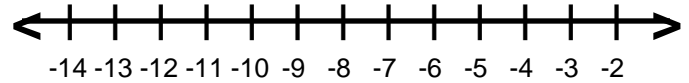
7)  $-5 < \frac{p}{7}$



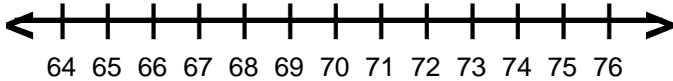
3)  $\frac{v}{2} < 7$



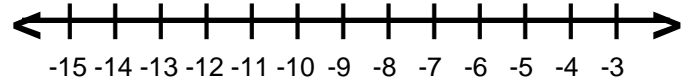
8)  $7b \leq -56$



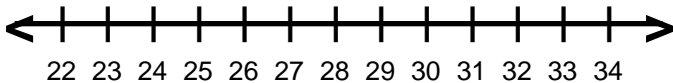
4)  $\frac{r}{6} \geq 11$



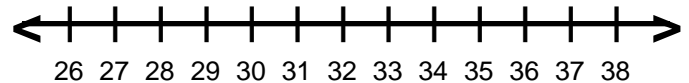
9)  $4s > -20$



5)  $6 \leq \frac{a}{5}$



10)  $5 \geq \frac{y}{6}$



Name : \_\_\_\_\_

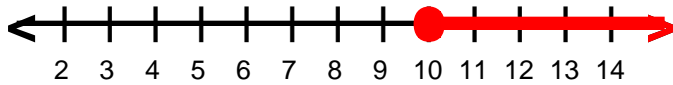
Score : \_\_\_\_\_

Teacher : \_\_\_\_\_

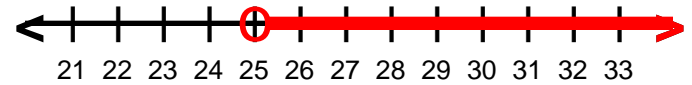
Date : \_\_\_\_\_

## Solve and Graph the Inequalities

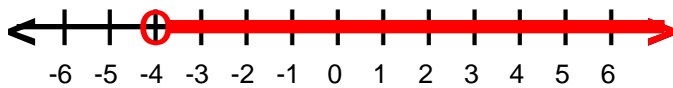
1)  $c \geq 10$



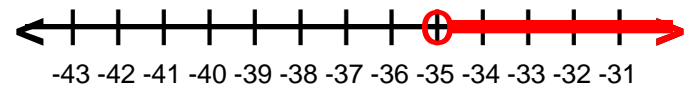
6)  $g > 25$



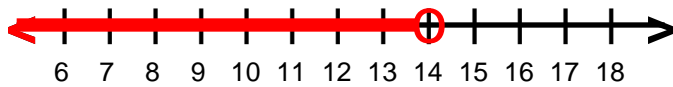
2)  $q > -4$



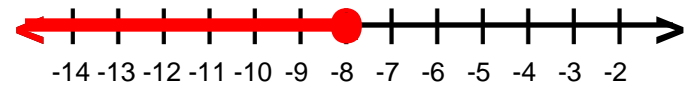
7)  $p > -35$



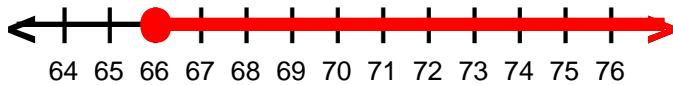
3)  $v < 14$



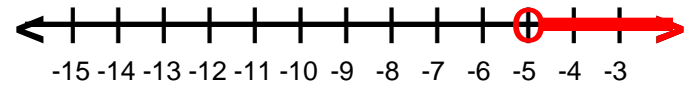
8)  $b \leq -8$



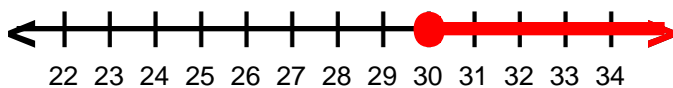
4)  $r \geq 66$



9)  $s > -5$



5)  $a \geq 30$



10)  $y \leq 30$

