

Name : _____

Score : _____

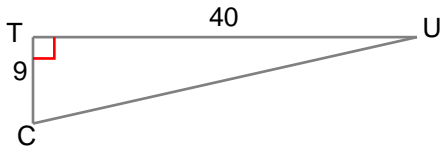
Teacher : _____

Date : _____

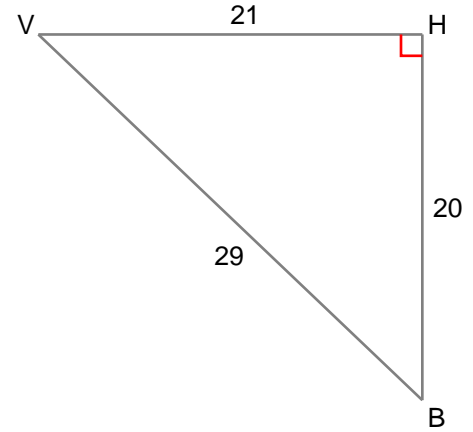
Inverse Trigonometric Ratios

Find the measure of the indicated angle to the nearest degree.

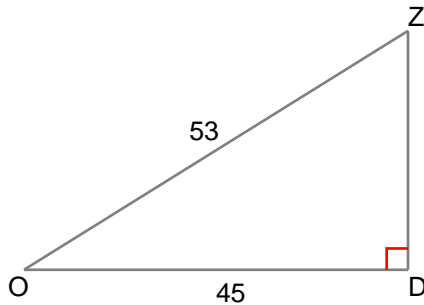
1) $m\angle C = \underline{\hspace{2cm}}^\circ$



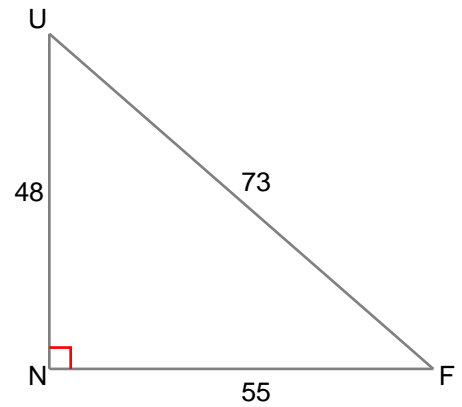
2) $m\angle V = \underline{\hspace{2cm}}^\circ$



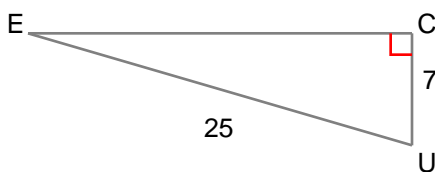
3) $m\angle Z = \underline{\hspace{2cm}}^\circ$



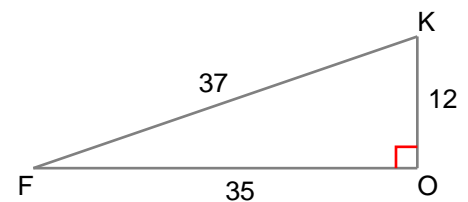
4) $m\angle F = \underline{\hspace{2cm}}^\circ$



5) $m\angle U = \underline{\hspace{2cm}}^\circ$



6) $m\angle F = \underline{\hspace{2cm}}^\circ$



Name : _____

Score : _____

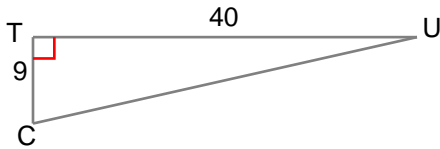
Teacher : _____

Date : _____

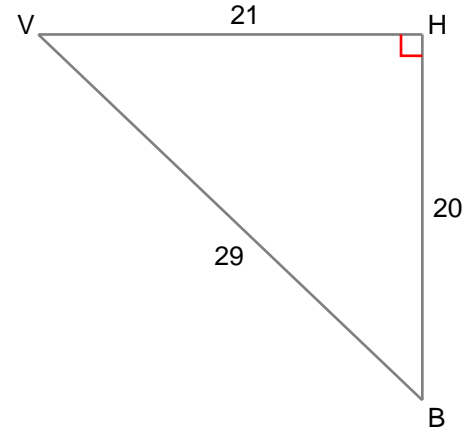
Inverse Trigonometric Ratios

Find the measure of the indicated angle to the nearest degree.

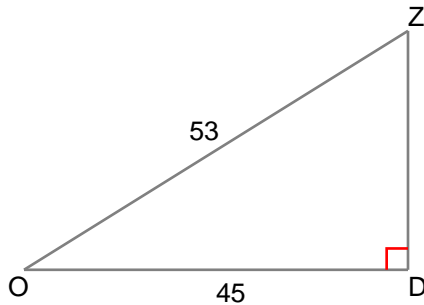
1) $m\angle C = \underline{77}^\circ$



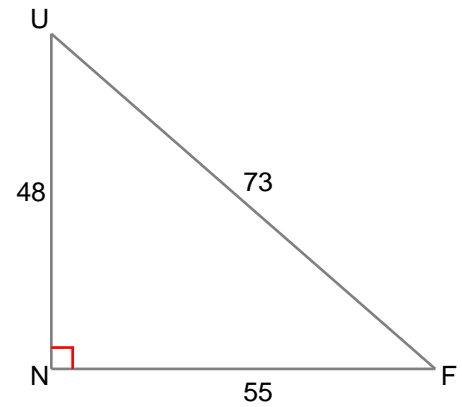
2) $m\angle V = \underline{44}^\circ$



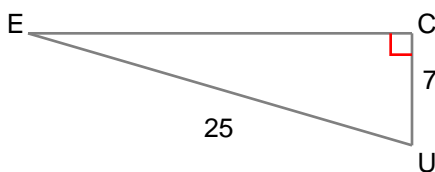
3) $m\angle Z = \underline{58}^\circ$



4) $m\angle F = \underline{41}^\circ$



5) $m\angle U = \underline{74}^\circ$



6) $m\angle F = \underline{19}^\circ$

