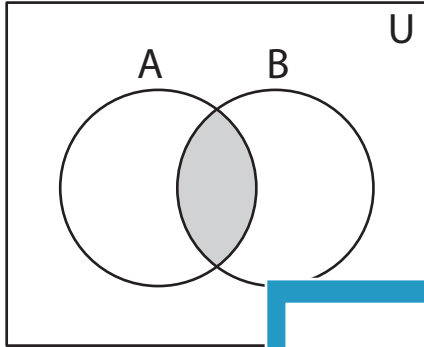


Venn Diagram

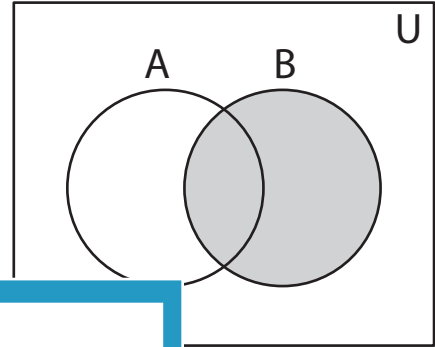
Sheet 2

Determine the shaded region.

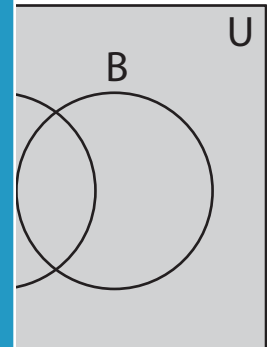
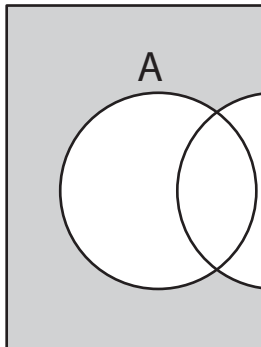
1)



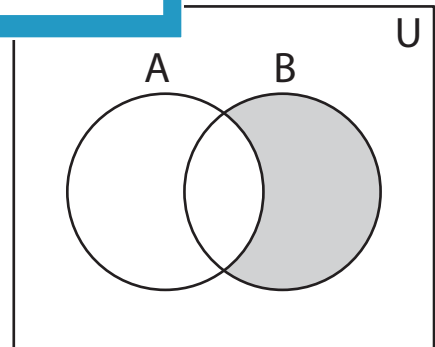
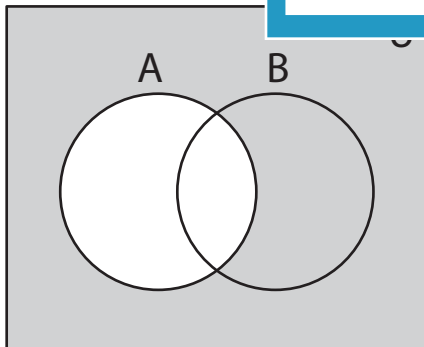
2)



3)



5)



PREVIEW

Access the largest collection of
worksheets for just **\$19.95** per year!

Members, please
log in to
download this
worksheet.

Log in

Not a member?
Please sign up to
gain complete
access.

Sign up

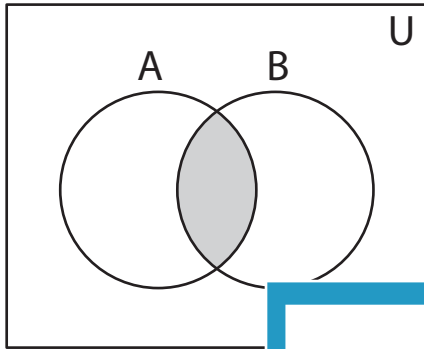
www.mathworksheets4kids.com

Answer key

Venn Diagram

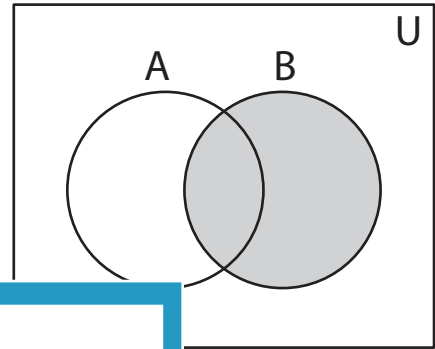
Determine the shaded region.

1)



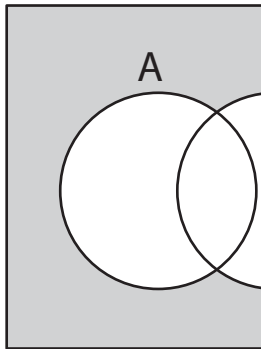
$(A \cap B), (A' \cup B')$

2)

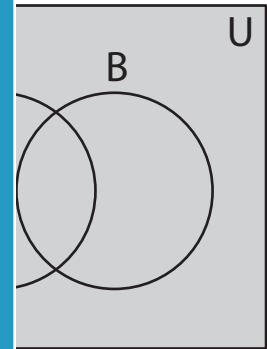


B

3)

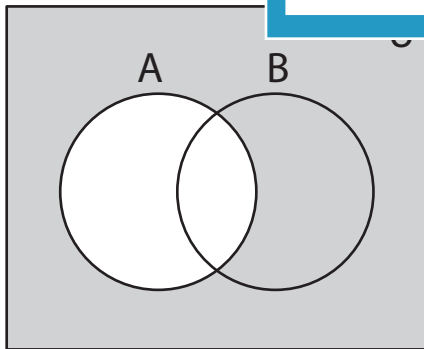


$(A' - B), (A' \cap B'), (A \cap B)'$

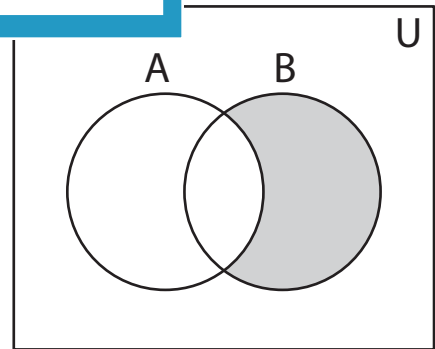


$(A' \cup B)$ or $(B \cup B')$

5)



A'



$(A' - B'), (A' \cap B), (A \cup B)'$ or $(B - A)$

PREVIEW

Access the largest collection of worksheets for just **\$19.95** per year!

Members, please log in to download this worksheet.

Log in

Not a member? Please sign up to gain complete access.

Sign up

www.mathworksheets4kids.com