






Bar Graph - Icecream Flavors

Sheet 2

Mrs.Barbara, a third-grade teacher recorded a data on favorite ice-cream flavors of her class students. Read the data and draw a bar graph. Answer the questions.

Chocolate	Pista	Vanilla	Strawberry	Butterscotch
				
36	16	12	22	24



1) Did more students like Chocolate or Butterscotch? _____

2) How many fewer Pista flavors did the kids like than Strawberry flavors? _____

3) Tick the flavor that tops the third place.






Chocolate Pista Vanilla Strawberry Butterscotch

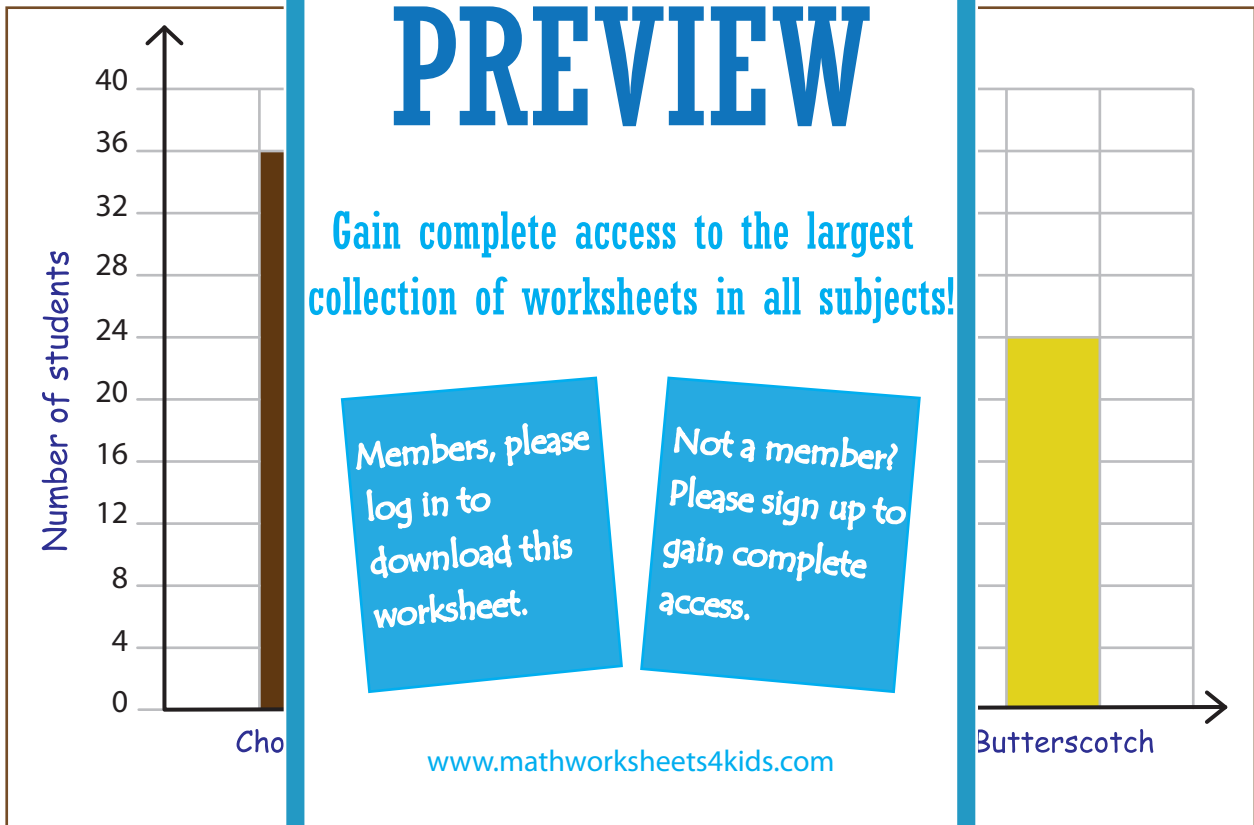
4) How many kids were participated in the survey? _____

Answer Key**Bar Graph - Icecream Flavors**

Sheet 2

Mrs.Barbara, a third-grade teacher recorded a data on favorite ice-cream flavors of her class students. Read the data and draw a bar graph. Answer the questions.

Chocolate	Pista	Vanilla	Strawberry	Butterscotch
				
36	16	12	22	24



1) Did more students like Chocolate or Butterscotch?

Chocolate

2) How many fewer Pista flavors did the kids like than Strawberry flavors?

16

3) Tick the flavor that tops the third place.

Chocolate Pista Vanilla Strawberry Butterscotch

4) How many kids were participated in the survey?

120