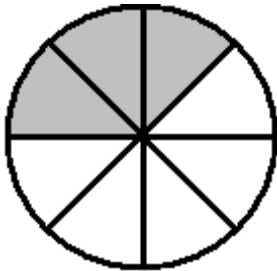


Student Name: \_\_\_\_\_

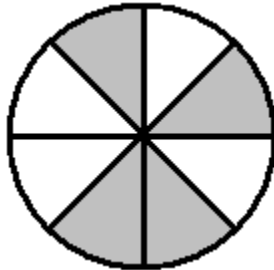
Score: \_\_\_\_\_

### Pizza Fractions

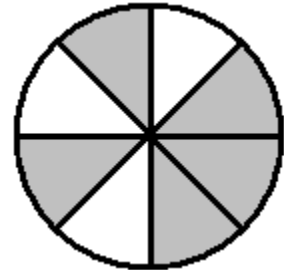
Marry make pizzas with two toppings, pepperoni and mushroom. Shaded parts are pepperonis and the rest are mushrooms. What fractions are pepperonis or mushrooms?



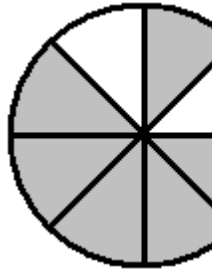
Pepperoni part = \_\_\_\_\_



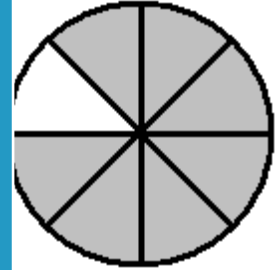
Pepperoni part = \_\_\_\_\_



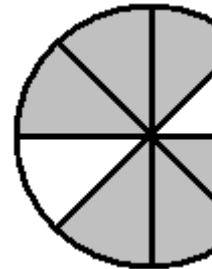
roni part = \_\_\_\_\_



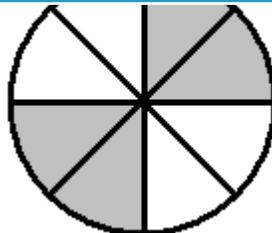
Pepperoni part = \_\_\_\_\_



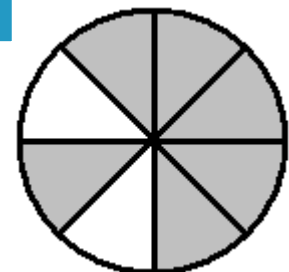
roni part = \_\_\_\_\_



Pepperoni part = \_\_\_\_\_



Mushroom part = \_\_\_\_\_



Pepperoni part = \_\_\_\_\_

**PREVIEW**

Access the largest collection of worksheets for just **\$19.95** per year!

Members, please log in to download this worksheet. **Log in**

Not a member? Please sign up to gain complete access. **Sign up**

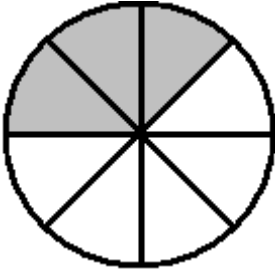
[www.mathworksheets4kids.com](http://www.mathworksheets4kids.com)

Student Name: \_\_\_\_\_

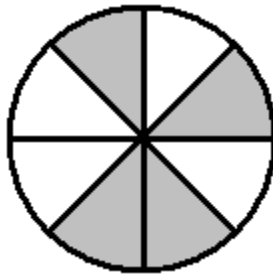
Answer key

Score: \_\_\_\_\_

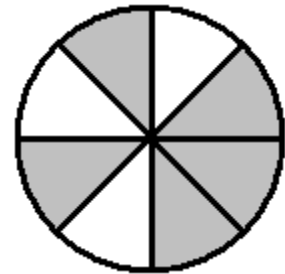
Pizza Fractions



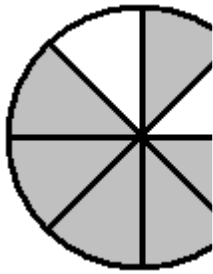
Pepperoni part =  $\frac{3}{8}$



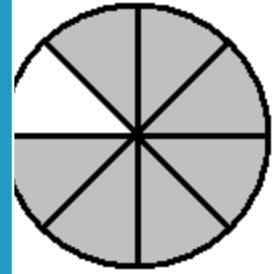
Mushroom part =  $\frac{4}{8}$



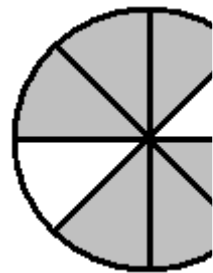
Pepperoni part =  $\frac{5}{8}$



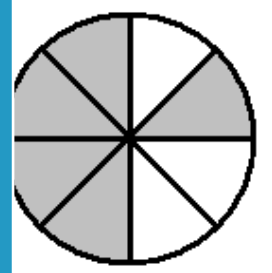
Pepperoni part =  $\frac{6}{8}$



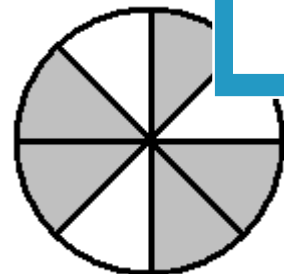
Pepperoni part =  $\frac{7}{8}$



Pepperoni part =  $\frac{6}{8}$



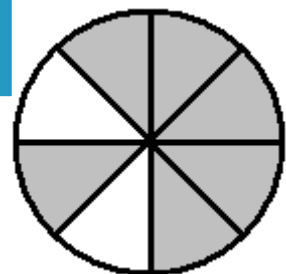
Pepperoni part =  $\frac{5}{8}$



Pepperoni part =  $\frac{5}{8}$



Mushroom part =  $\frac{4}{8}$



Pepperoni part =  $\frac{6}{8}$

PREVIEW

Access the largest collection of worksheets for just **\$19.95** per year!

Members, please log in to download this worksheet.

Log in

Not a member? Please sign up to gain complete access.

Sign up

[www.mathworksheets4kids.com](http://www.mathworksheets4kids.com)