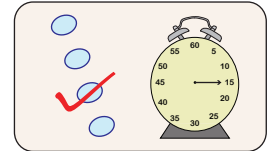


Multiplying Fractions

- 1) Ben takes up a 45 minute online test. After answering 10 questions, the timer indicates that one-fifth of the total time is up. How much time did Ben take to answer those 10 questions?



- 2) A tree in Peter's garden casts a shadow that is 57 feet long. If the tree is one-third the length of its shadow, how long is the tree?

PREVIEW

Gain complete access to the largest collection of worksheets in all subjects!


Members, please log in to download this worksheet.

Not a member? Please sign up to gain complete access.

www.mathworksheets4kids.com



- 3) Tom owns a retail store. He sold two-thirds of the total number of water jugs he had in stock. How many water jugs were left to be sold?



- 4) Gretchen buys a set of 10 garments. She sells 8/5 th of the purchase price for each garment at a sale. She sells them for 1/2 the price she has bought the set for. How much money does she make from the sale?

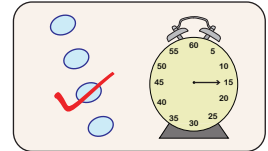


- 5) Wayne spends 1/6 th of an hour to walk his dog, Scamp every morning. How much time does Wayne spend walking the dog in a week?



Multiplying Fractions

- 1) Ben takes up a 45 minute online test. After answering 10 questions, the timer indicates that one-fifth of the total time is up. How much time did Ben take to answer those 10 questions?



9 minutes

- 2) A tree in Peter's garden casts a shadow that is 57 feet long. If the tree is one-third the length of its shadow, how long is the tree?



19 feet


- 3) Tom owns a retail store. He sold two-thirds of the total number of water jugs he had in stock. How many water jugs does he have left?

Gain complete access to the largest collection of worksheets in all subjects!

Members, please log in to download this worksheet.

Not a member? Please sign up to gain complete access.

www.mathworksheets4kids.com



152

- 4) Gretchen buys a set of 5 garments at \$192. She sells them for 5/8 of the price she has bought the set for. How much money does she make?

How much money does she make?



\$96

- 5) Wayne spends 1/6 th of an hour to walk his dog, Scamp every morning. How much time does Wayne spend walking the dog in a week?



70 minutes or 1 hour and ten minutes