

Name : _____

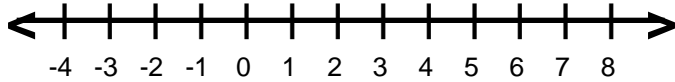
Score : _____

Teacher : _____

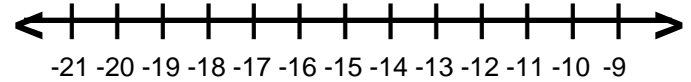
Date : _____

Solve and Graph the Inequalities

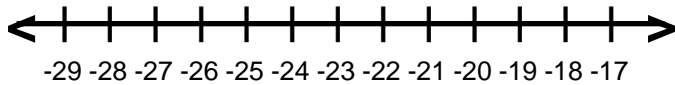
1) $-6 \leq r - 9$



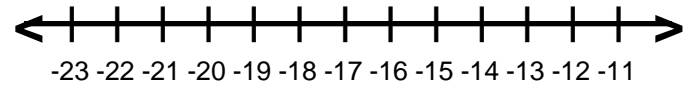
6) $-8 \geq 5 + q$



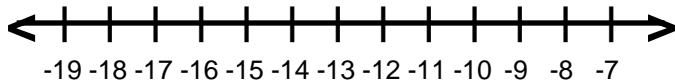
2) $z + 9 > -15$



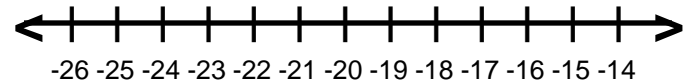
7) $-14 \geq v + 3$



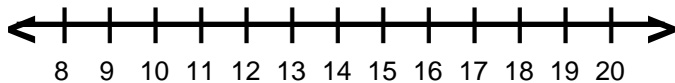
3) $5 + x \geq -5$



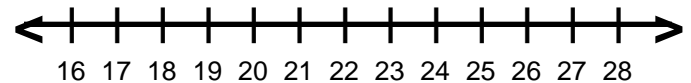
8) $s + 2 < -18$



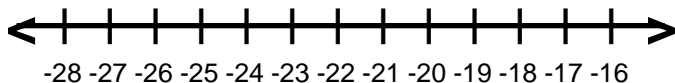
4) $17 > 3 + c$



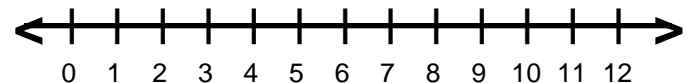
9) $-4 + f < 18$



5) $g + 7 \leq -15$



10) $2 + a \leq 11$



Name : _____

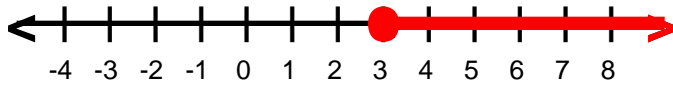
Score : _____

Teacher : _____

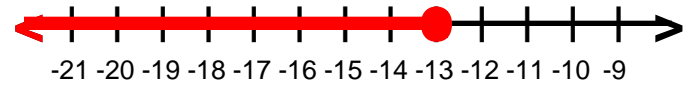
Date : _____

Solve and Graph the Inequalities

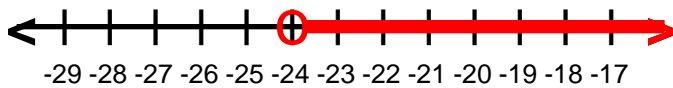
1) $r \geq 3$



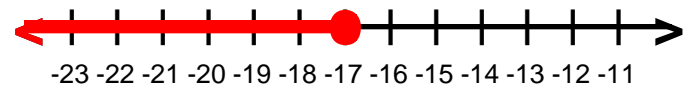
6) $q \leq -13$



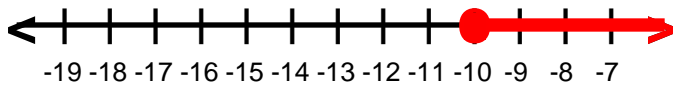
2) $z > -24$



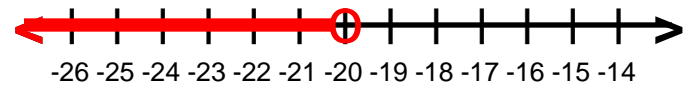
7) $v \leq -17$



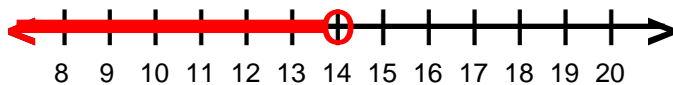
3) $x \geq -10$



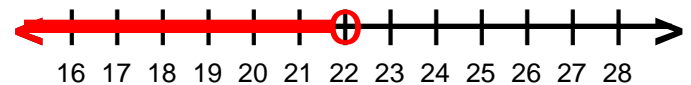
8) $s < -20$



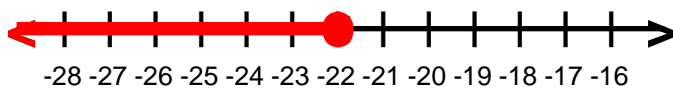
4) $c < 14$



9) $f < 22$



5) $g \leq -22$



10) $a \leq 9$

