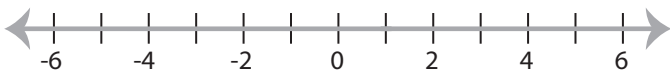


Solving & Graphing Inequalities

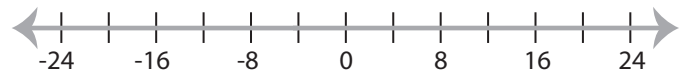
MS1

Solve each inequality and graph the solution.

1) $5 < 9x - 4$



2) $3x + 7 \leq -5$

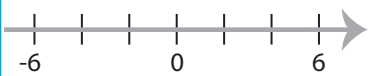


3) $1 > \frac{x}{7} - 9$



PREVIEW

Access the largest collection of
worksheets for just **\$19.95** per year!



5) $3 < 2x - 11$



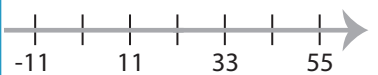
Members, please
log in to
download this
worksheet.

Log in

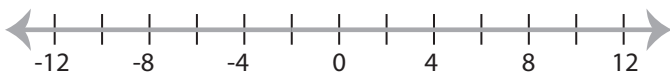
Not a member?
Please sign up to
gain complete
access.

Sign up

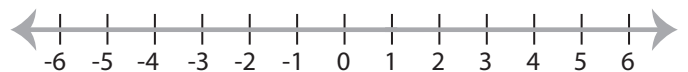
www.mathworksheets4kids.com



7) $1 \geq 4x + 9$



8) $5x - 1 < 4$



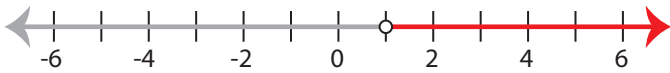
Solving & Graphing Inequalities

MS1

Solve each inequality and graph the solution.

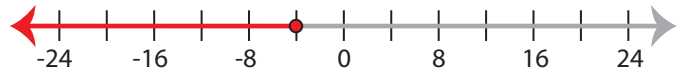
1) $5 < 9x - 4$

$x > 1$



2) $3x + 7 \leq -5$

$x \leq -4$



3) $1 > \frac{x}{7} - 9$

$x < 70$



PREVIEW

Access the largest collection of
worksheets for just **\$19.95** per year!

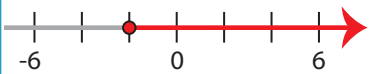
Members, please
log in to
download this
worksheet.

Log in

Not a member?
Please sign up to
gain complete
access.

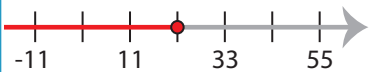
Sign up

www.mathworksheets4kids.com



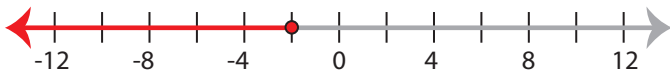
5) $3 < 2x - 11$

$x > 7$



7) $1 \geq 4x + 9$

$x \leq -2$



8) $5x - 1 < 4$

$x < 1$

