

Name : _____

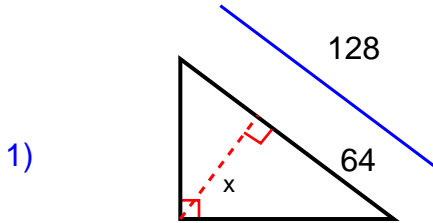
Score : _____

Teacher : _____

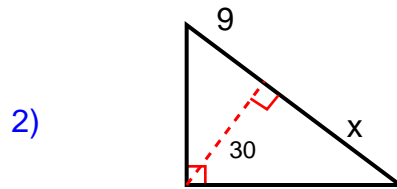
Date : _____

Similar Right Triangles

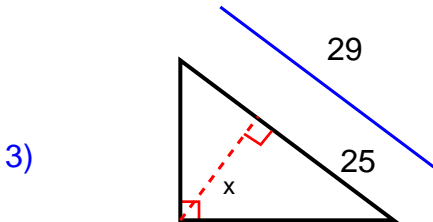
Find x . Leave your answer in the simplest radical form.



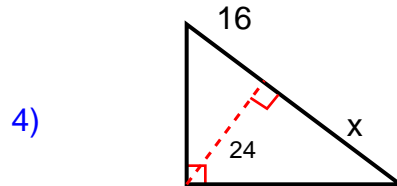
$x = \underline{\hspace{2cm}}$



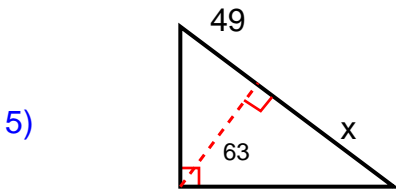
$x = \underline{\hspace{2cm}}$



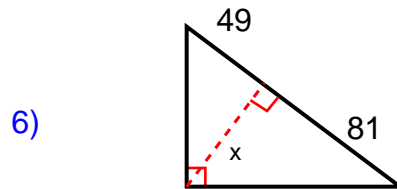
$x = \underline{\hspace{2cm}}$



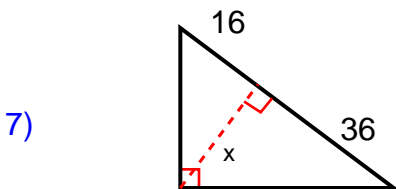
$x = \underline{\hspace{2cm}}$



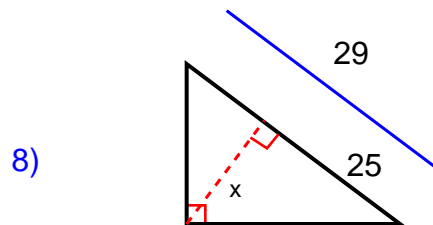
$x = \underline{\hspace{2cm}}$



$x = \underline{\hspace{2cm}}$



$x = \underline{\hspace{2cm}}$



$x = \underline{\hspace{2cm}}$



Name : _____

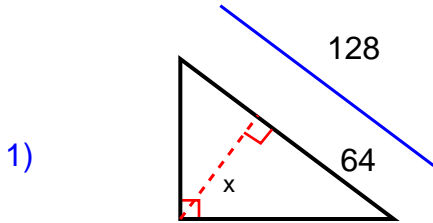
Score : _____

Teacher : _____

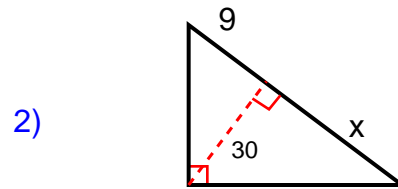
Date : _____

Similar Right Triangles

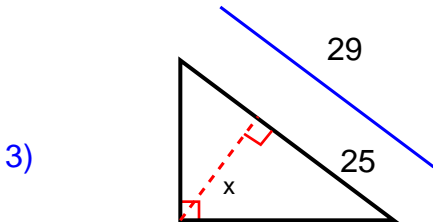
Find x. Leave your answer in the simplest radical form.



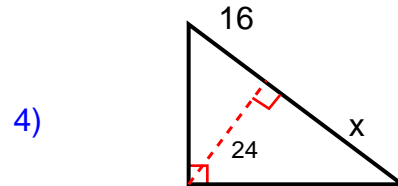
$$x = \underline{64}$$



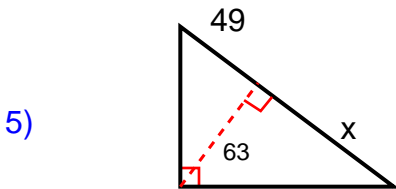
$$x = \underline{100}$$



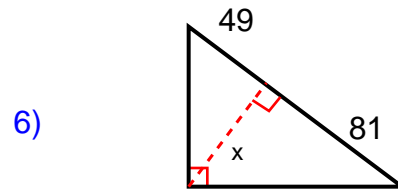
$$x = \underline{10}$$



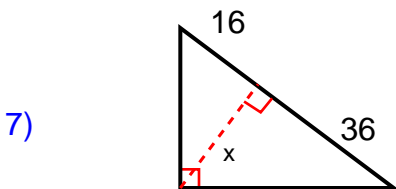
$$x = \underline{36}$$



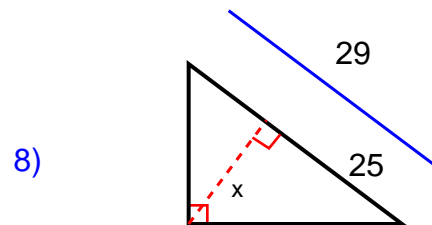
$$x = \underline{81}$$



$$x = \underline{63}$$



$$x = \underline{24}$$



$$x = \underline{10}$$

