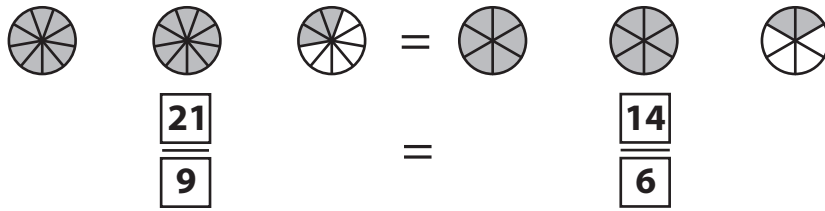


Equivalent Fractions

Example:



Write the equivalent improper fractions for the pie models in each problem.



PREVIEW

Access the largest collection of
worksheets for just **\$19.95** per year!

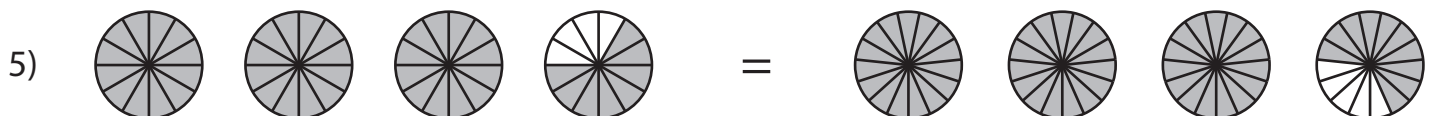
Members, please
log in to
download this
worksheet.

Log in

Not a member?
Please sign up to
gain complete
access.

Sign up

www.mathworksheets4kids.com



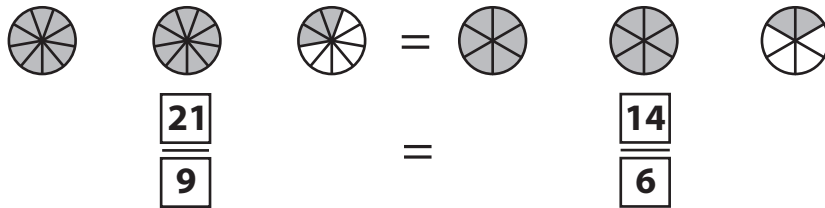
=

=

Answer key

Equivalent Fractions

Example:



Write the equivalent improper fractions for the pie models in each problem.



2
1

5
2



7
3

21
9



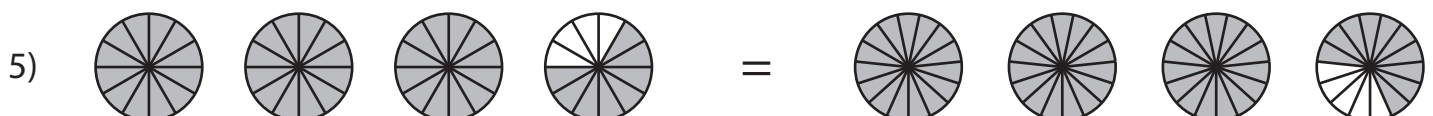
5
1

17
5



9
4

18
8



44
12

55
15

PREVIEW

Access the largest collection of
worksheets for just **\$19.95** per year!

Members, please
log in to
download this
worksheet.

Log in

Not a member?
Please sign up to
gain complete
access.

Sign up

www.mathworksheets4kids.com