

Name : \_\_\_\_\_

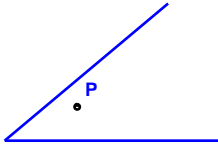
Score : \_\_\_\_\_

Teacher : \_\_\_\_\_

Date : \_\_\_\_\_

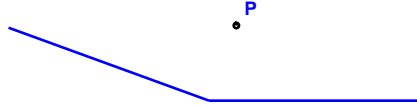
State if the given point is interior, exterior or on the angle.

1)



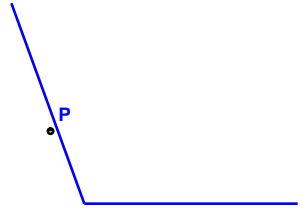
\_\_\_\_\_

2)



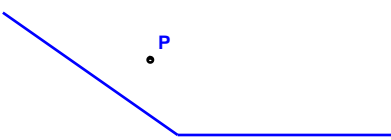
\_\_\_\_\_

3)



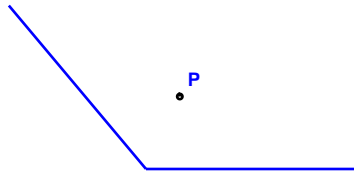
\_\_\_\_\_

4)



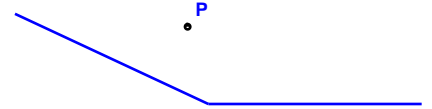
\_\_\_\_\_

5)



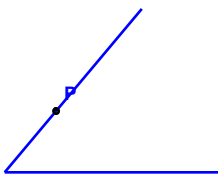
\_\_\_\_\_

6)



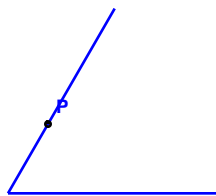
\_\_\_\_\_

7)



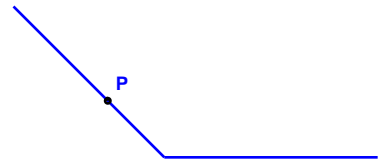
\_\_\_\_\_

8)



\_\_\_\_\_

9)



\_\_\_\_\_



Name : \_\_\_\_\_

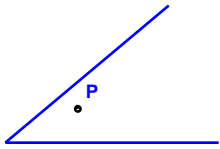
Score : \_\_\_\_\_

Teacher : \_\_\_\_\_

Date : \_\_\_\_\_

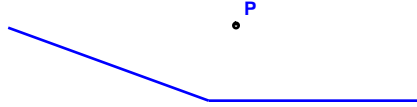
State if the given point is interior, exterior or on the angle.

1)



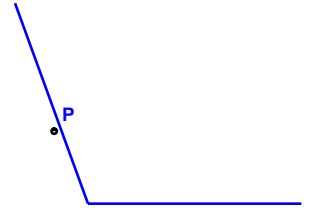
Interior to the Angle

2)



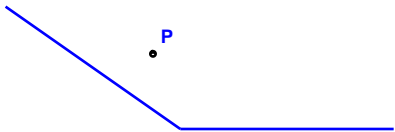
Interior to the Angle

3)



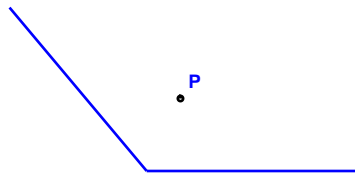
Exterior to the Angle

4)



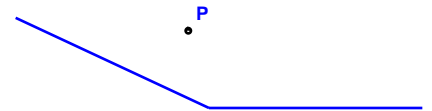
Interior to the Angle

5)



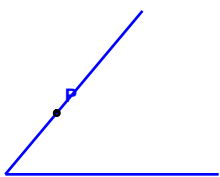
Interior to the Angle

6)



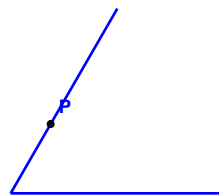
Interior to the Angle

7)



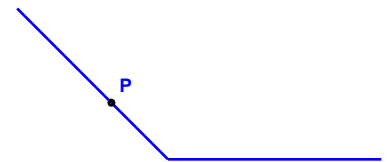
Exterior to the Angle

8)



On the Angle

9)



On the Angle

