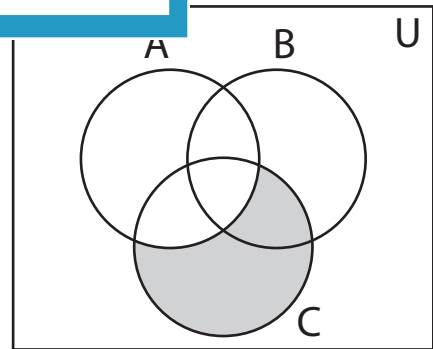
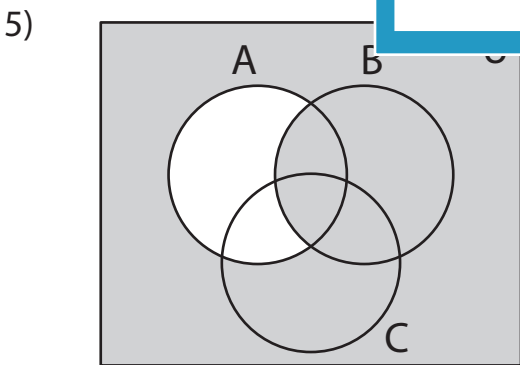
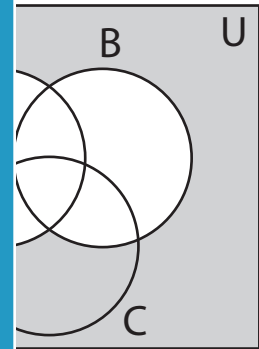
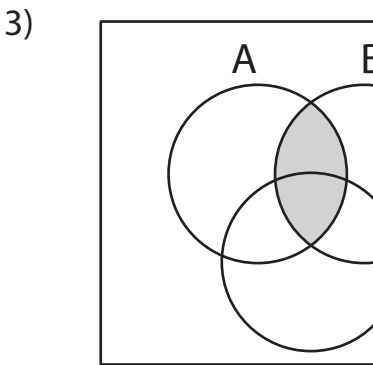
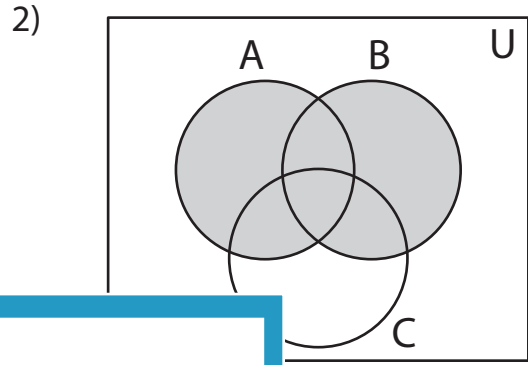
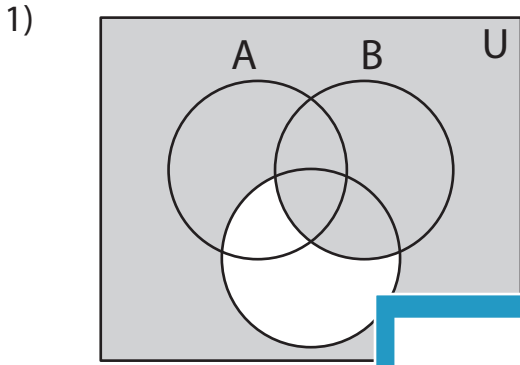


Venn Diagram

Determine the shaded region.



PREVIEW

Gain complete access to the largest collection of worksheets in all subjects!

Members, please log in to download this worksheet.

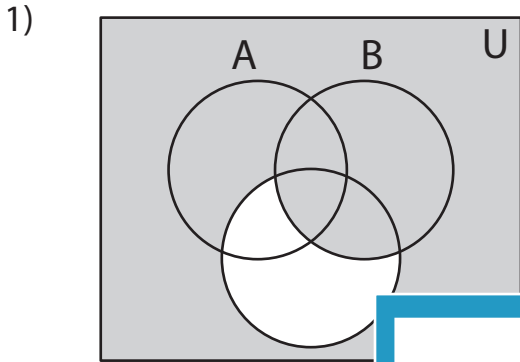
Not a member? Please sign up to gain complete access.

www.mathworksheets4kids.com

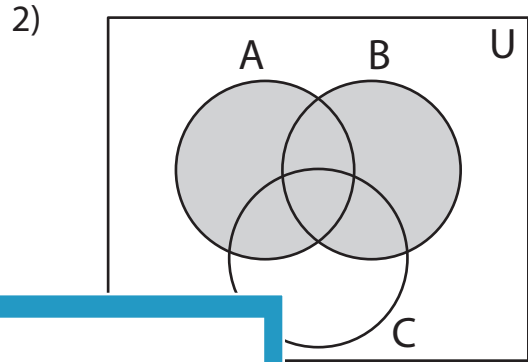
Answer key

Venn Diagram

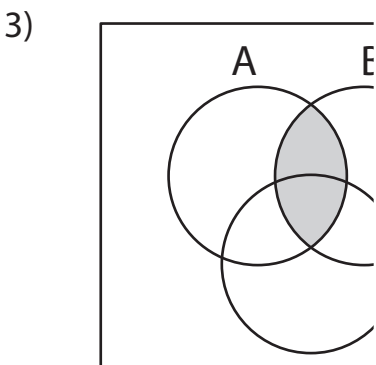
Determine the shaded region.



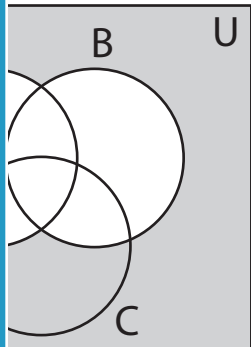
$(B \cup C)', (B' \cap C)', (A \cap B)'$



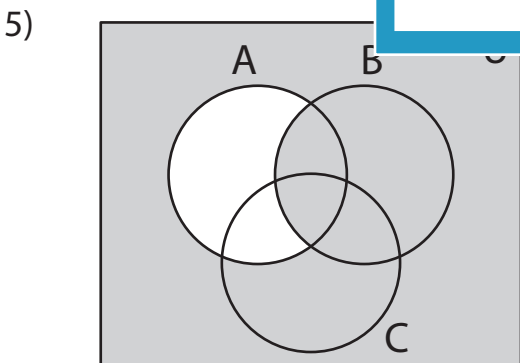
$B)', (A' - B)' or (B' - A)'$



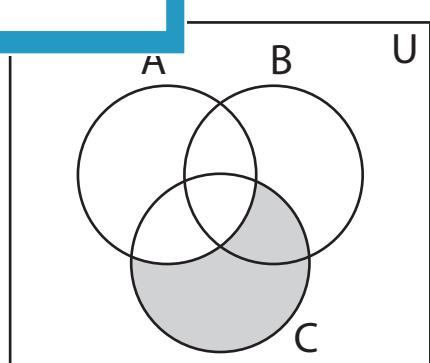
$(A \cap B), (A' \cup B)', (A - B)'$



$(B)', (A' - B) or (B' - A)$



$(A' \cup B), (A \cap B)', (A - B)' or (B' - A)'$



$(A \cup C)', (A' \cap C), (C - A) or (A' - C)$

PREVIEW

Gain complete access to the largest collection of worksheets in all subjects!

Members, please log in to download this worksheet.

Not a member? Please sign up to gain complete access.

www.mathworksheets4kids.com