

Name : \_\_\_\_\_

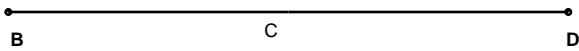
Score : \_\_\_\_\_

Teacher : \_\_\_\_\_

Date : \_\_\_\_\_

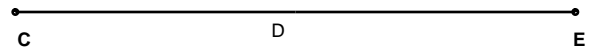
Draw Angle A to the Nearest Degree.

1 )



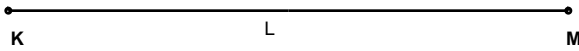
Angle A = 90°

2 )




Angle A = 155°

3 )



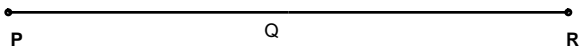
Angle A = 67°

4 )



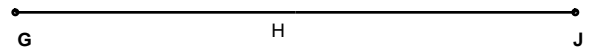
Angle A = 112°

5 )



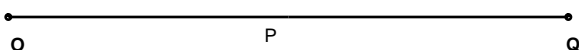
Angle A = 48°

6 )




Angle A = 99°

7 )



Angle A = 108°

8 )



Angle A = 140°



Name : \_\_\_\_\_

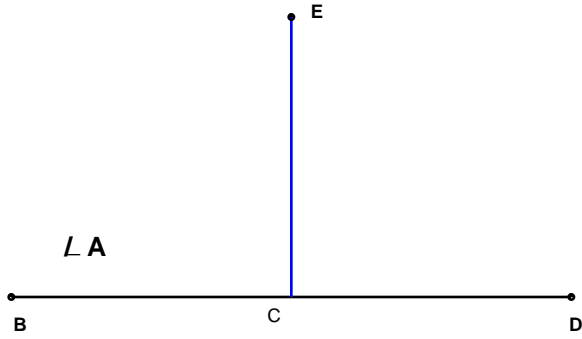
Score : \_\_\_\_\_

Teacher : \_\_\_\_\_

Date : \_\_\_\_\_

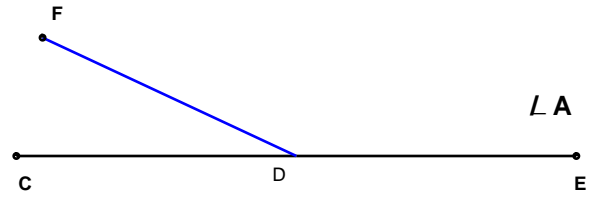
Draw Angle A to the Nearest Degree.

1 )



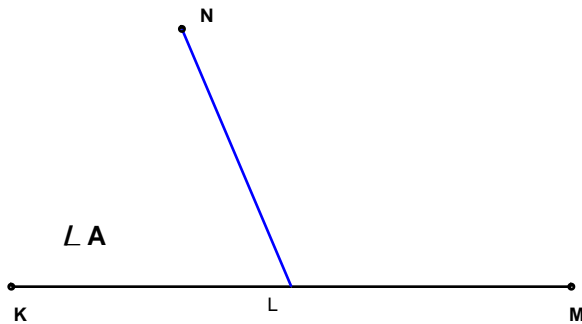
Angle A = 90°

2 )



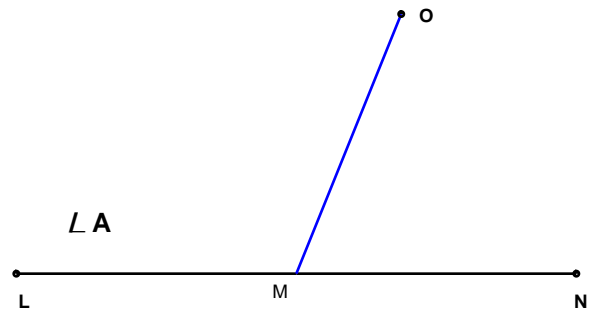
Angle A = 155°

3 )



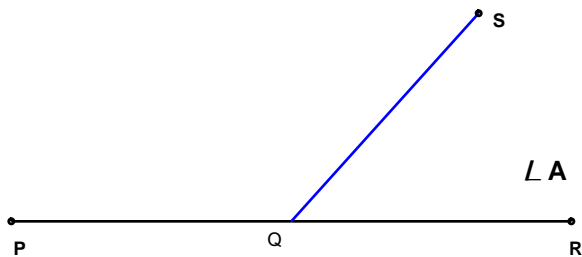
Angle A = 67°

4 )



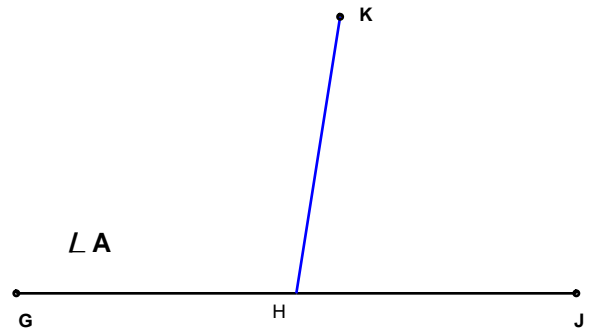
Angle A = 112°

5 )



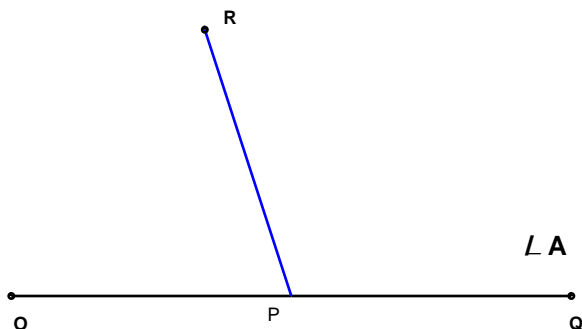
Angle A = 48°

6 )



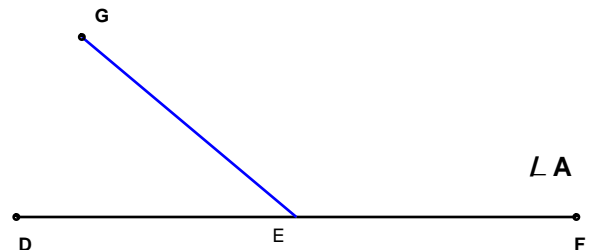
Angle A = 99°

7 )



Angle A = 108°

8 )



Angle A = 140°

