

Name : \_\_\_\_\_

Score : \_\_\_\_\_

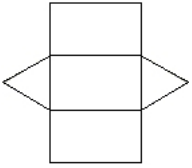
Teacher : \_\_\_\_\_

Date : \_\_\_\_\_

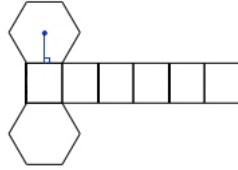
### Nets Of Solids

Identify each solid given its net.

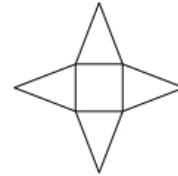
1)



2)

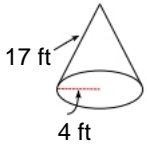


3)

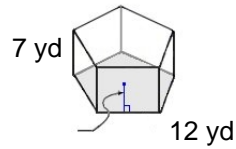


Sketch the net of each solid. Label the given measurements.

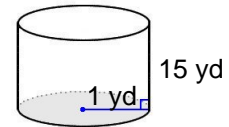
4)



5)

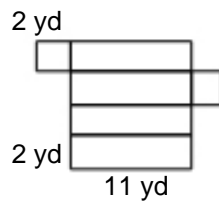


6)

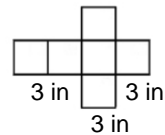


Sketch the solid that can be created from each net. Label the given measurements.

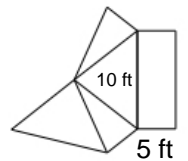
7)



8)



9)



Name : \_\_\_\_\_

Score : \_\_\_\_\_

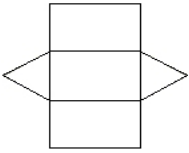
Teacher : \_\_\_\_\_

Date : \_\_\_\_\_

## Nets Of Solids

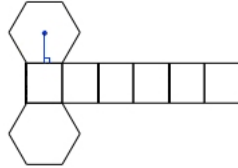
Identify each solid given its net.

1)



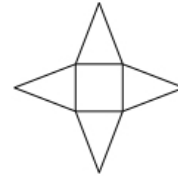
Triangular Prism

2)



Hexagonal Prism

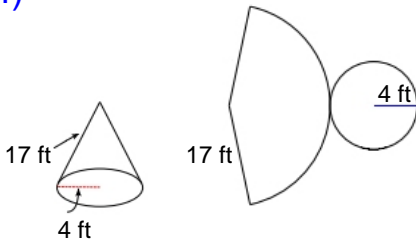
3)



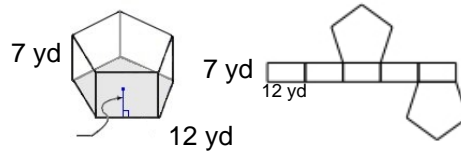
Square Pyramid

Sketch the net of each solid. Label the given measurements.

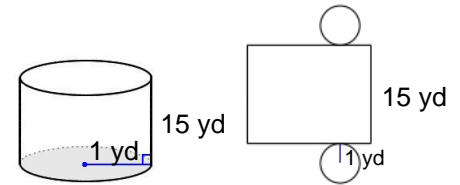
4)



5)

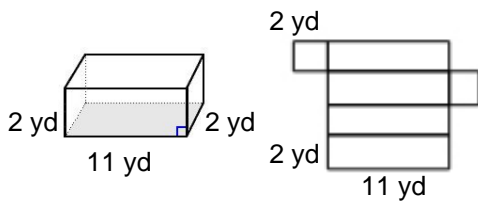


6)

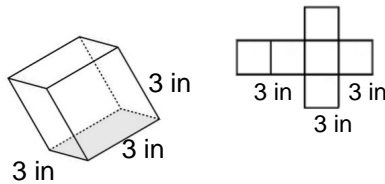


Sketch the solid that can be created from each net. Label the given measurements.

7)



8)



9)

