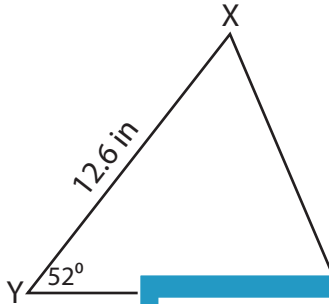


# Area of a Triangle

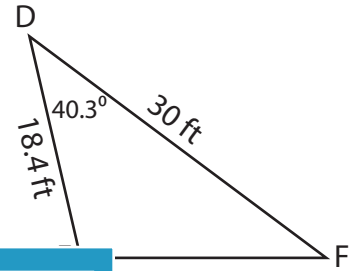
Find the area of each triangle. Round your answer to two decimal places.

1)



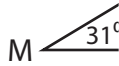
Area = \_\_\_\_\_

2)



\_\_\_\_\_

3)



Area = \_\_\_\_\_

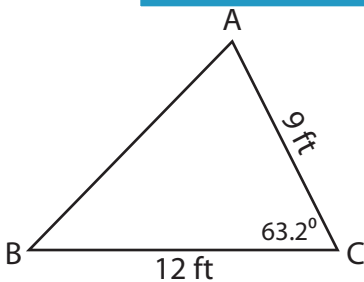
Gain complete access to the largest collection of worksheets in all subjects!

Members, please log in to download this worksheet.

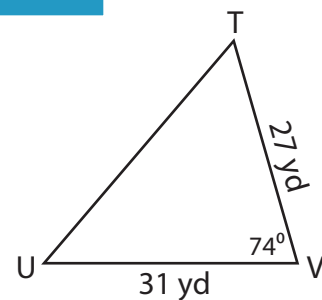
Not a member? Please sign up to gain complete access.

www.mathworksheets4kids.com

5)



Area = \_\_\_\_\_

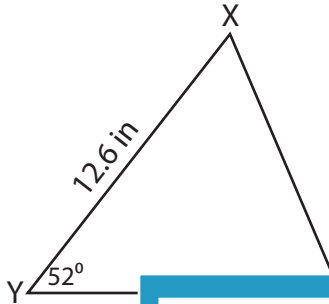


Area = \_\_\_\_\_

**Area of a Triangle**

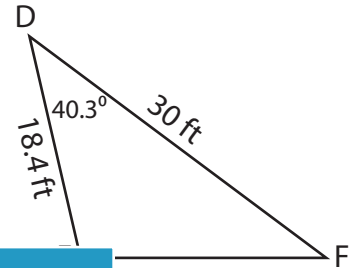
Find the area of each triangle. Round your answer to two decimal places.

1)

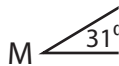


Area = \_\_\_\_\_

2)

**178.51 ft<sup>2</sup>**

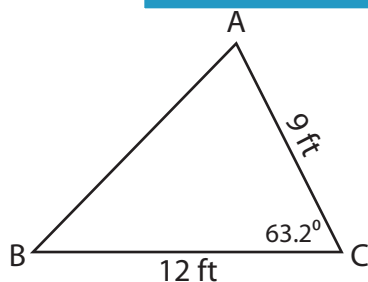
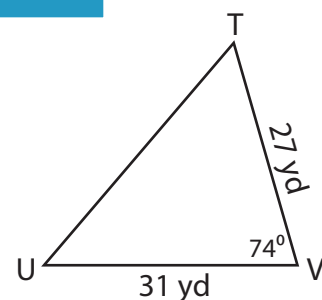
3)



Area = \_\_\_\_\_

**154.9 in<sup>2</sup>**

5)

Area = **48.2 ft<sup>2</sup>**Area = **402.29 yd<sup>2</sup>****PREVIEW**

Gain complete access to the largest  
collection of worksheets in all subjects!

Members, please  
log in to  
download this  
worksheet.

Not a member?  
Please sign up to  
gain complete  
access.

[www.mathworksheets4kids.com](http://www.mathworksheets4kids.com)