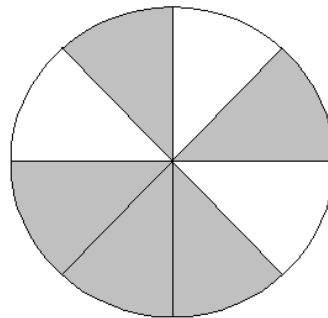
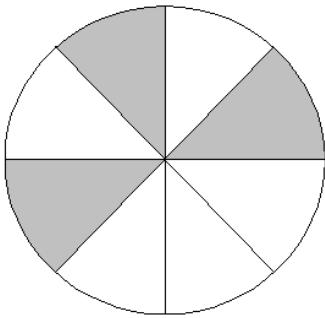


Student Name: _____

Score: _____

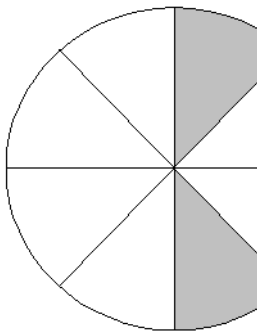
Write as Fraction

Sheet 2



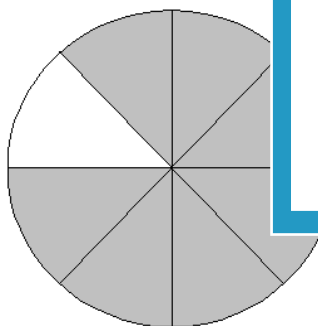
Shaded Part = _____

Unshaded Part = _____




Shaded Part = _____

Unshaded Part = _____



Shaded Part = _____

Unshaded Part = _____



Shaded Part = _____

Unshaded Part = _____

PREVIEW

Access the largest collection of worksheets for just **\$19.95** per year!

Members, please log in to download this worksheet.

Log in

Not a member? Please sign up to gain complete access.

Sign up

www.mathworksheets4kids.com

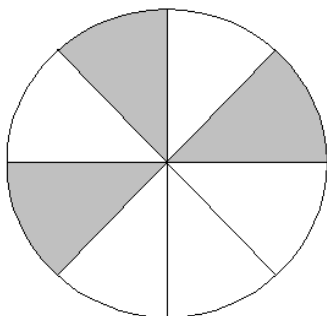
Student Name: _____

Score: _____

Answer key

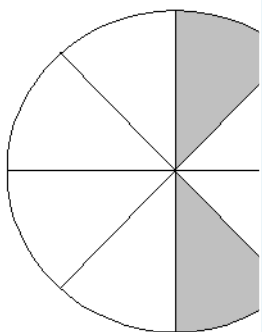
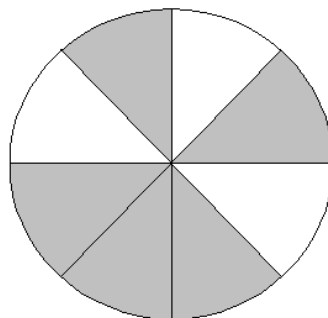
Write as Fraction

Sheet 2



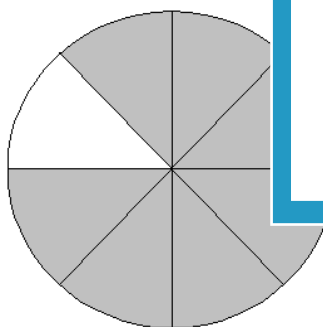
Shaded Part = $\frac{3}{8}$

Unshaded Part = $\frac{5}{8}$



Shaded Part = $\frac{2}{8}$

Unshaded Part = $\frac{6}{8}$



Shaded Part = $\frac{7}{8}$

Unshaded Part = $\frac{1}{8}$


PREVIEW

Access the largest collection of worksheets for just **\$19.95** per year!

Members, please log in to download this worksheet.

Not a member? Please sign up to gain complete access.

www.mathworksheets4kids.com



Shaded Part = $\frac{4}{8}$

Unshaded Part = $\frac{4}{8}$