

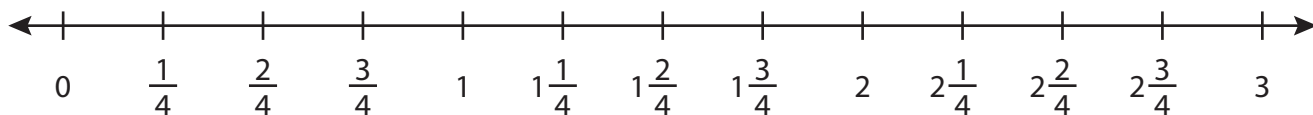
Name : _____

Addition using Number Line

3addends: T1S1

Indicate hops on each number line and complete the addition sentences.

1) $\frac{2}{4} + \frac{3}{4} + 1\frac{3}{4} =$ _____



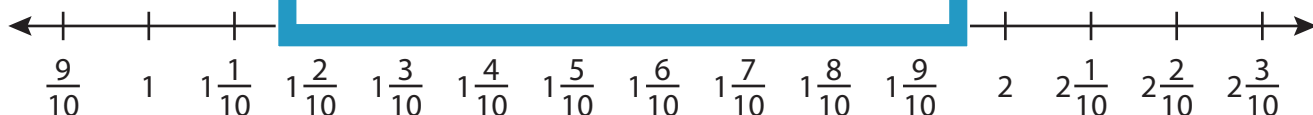
2) $\frac{1}{3} + 1\frac{2}{3}$



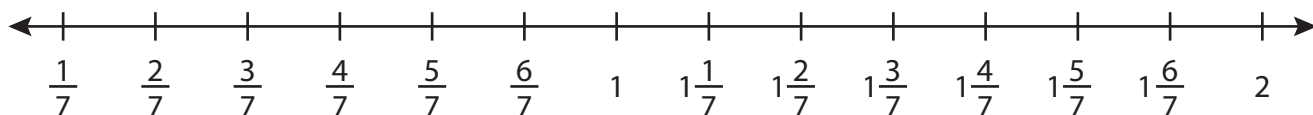
3) $\frac{1}{9} + \frac{4}{9}$



4) $\frac{9}{10} + 1\frac{1}{10}$



5) $\frac{2}{7} + \frac{1}{7} + \frac{6}{7} =$ _____



PREVIEW

Gain complete access to the largest collection of worksheets in all subjects!

Members, please log in to download this worksheet.

Not a member? Please sign up to gain complete access.

www.mathworksheets4kids.com

Name : _____

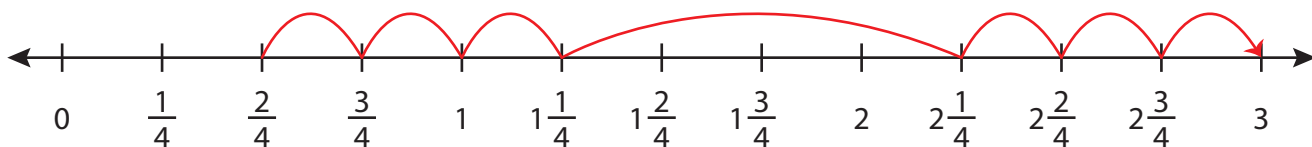
Answer key

Addition using Number Line

3addends: T1S1

Indicate hops on each number line and complete the addition sentences.

1) $\frac{2}{4} + \frac{3}{4} + 1\frac{3}{4} = \underline{\quad 3 \quad}$



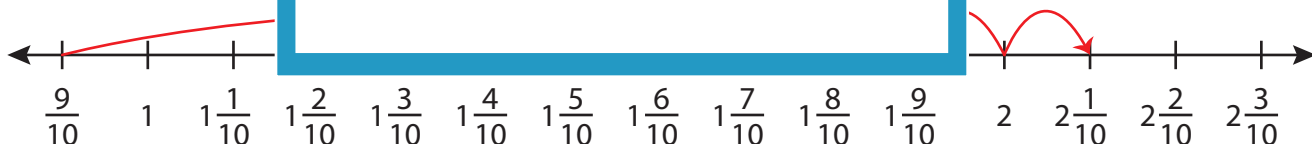
2) $\frac{1}{3} + 1\frac{2}{3}$



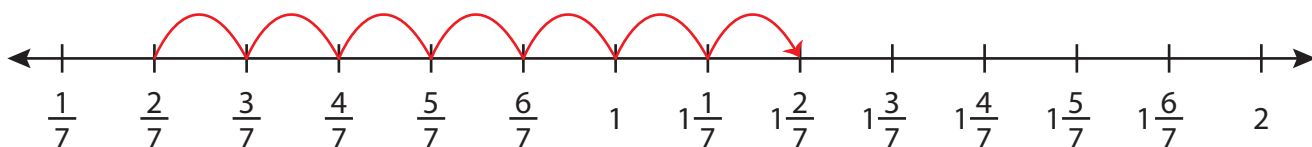
3) $\frac{1}{9} + \frac{4}{9}$



4) $\frac{9}{10} + 1\frac{1}{10}$



5) $\frac{2}{7} + \frac{1}{7} + \frac{6}{7} = \underline{\quad 1\frac{2}{7} \quad}$



PREVIEW

Gain complete access to the largest collection of worksheets in all subjects!

Members, please log in to download this worksheet.

Not a member? Please sign up to gain complete access.

www.mathworksheets4kids.com