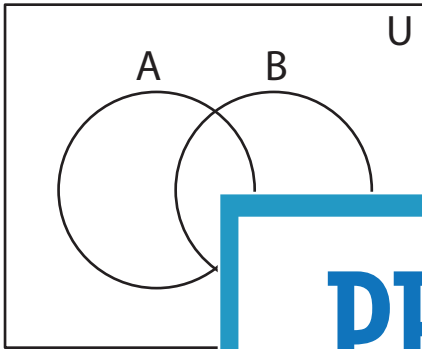


## Shading - Venn Diagram

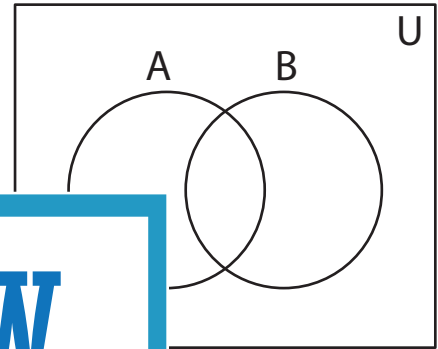
L2S2

Shade the given region.

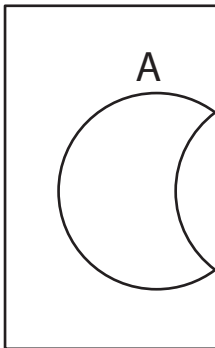
1)  $(A \cap B)'$



2)  $(B - A)'$



3)  $A - B$



Access the largest collection of  
worksheets for just **\$19.95** per year!

Members, please  
log in to  
download this  
worksheet.

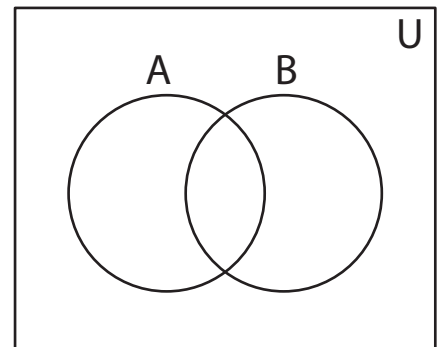
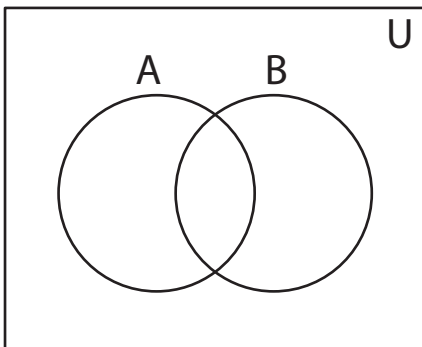
Log in

Not a member?  
Please sign up to  
gain complete  
access.

Sign up

[www.mathworksheets4kids.com](http://www.mathworksheets4kids.com)

5)  $A' \cup B$

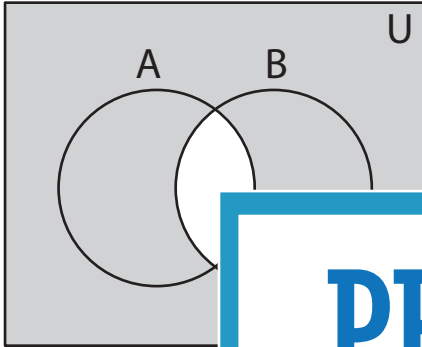


**Answer key****Shading - Venn Diagram**

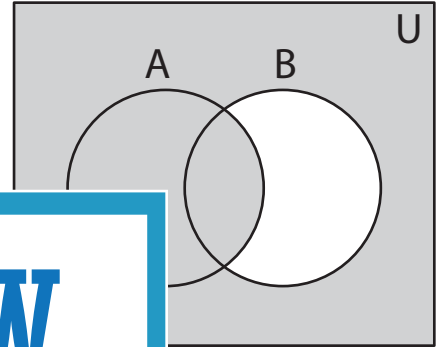
L2S2

Shade the given region.

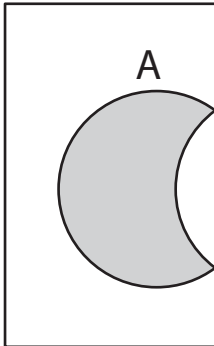
1)  $(A \cap B)'$



2)  $(B - A)'$



3)  $A - B$



**PREVIEW**

Access the largest collection of  
worksheets for just **\$19.95** per year!

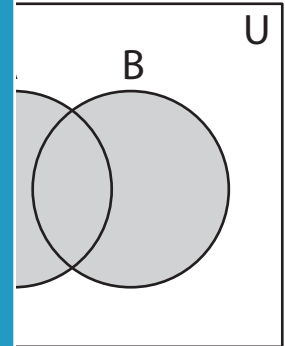
Members, please  
log in to  
download this  
worksheet.

**Log in**

Not a member?  
Please sign up to  
gain complete  
access.

**Sign up**

[www.mathworksheets4kids.com](http://www.mathworksheets4kids.com)



5)  $A' \cup B$

