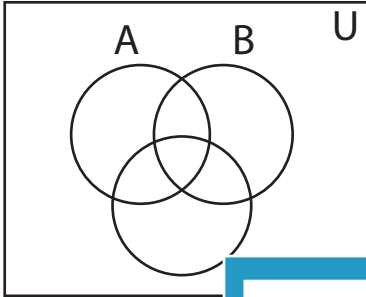


Shading - Venn Diagram

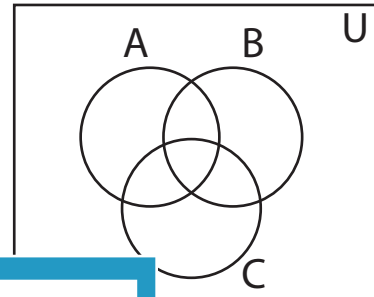
L2S1

Shade the given region.

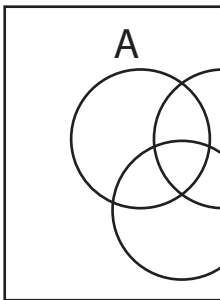
1) $(A \cap C)'$



2) $C' - B'$



3) $B - C$



PREVIEW

Access the largest collection of
worksheets for just **\$19.95** per year!


Members, please
log in to
download this
worksheet.

Log in

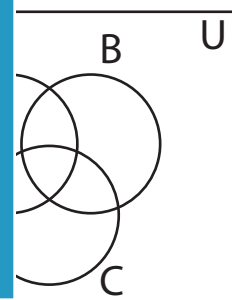
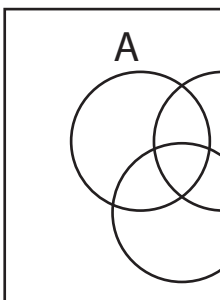
Not a member?
Please sign up to
gain complete
access.

Sign up

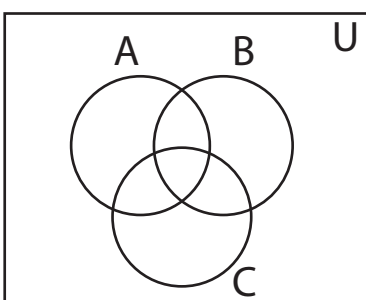
www.mathworksheets4kids.com



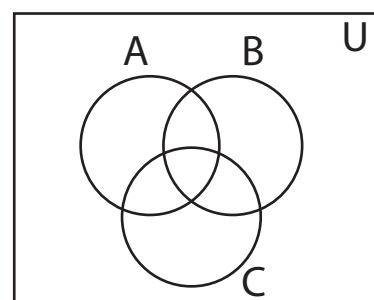
5) $B' - A$



7) $A - B'$



8) $B \cup C$

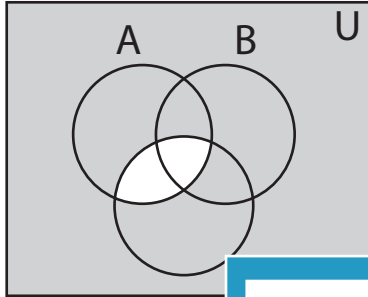


Answer key**Shading - Venn Diagram**

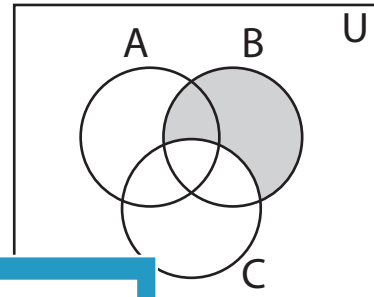
L2S1

Shade the given region.

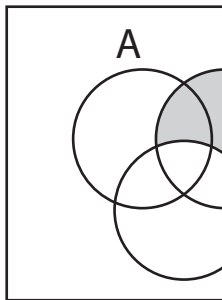
1) $(A \cap C)'$



2) $C' - B'$



3) $B - C$



PREVIEW

Access the largest collection of
worksheets for just **\$19.95** per year!

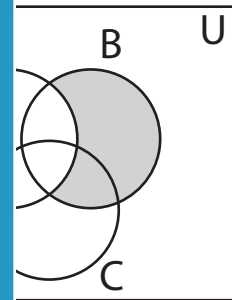
Members, please
log in to
download this
worksheet.

Log in

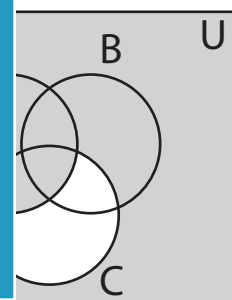
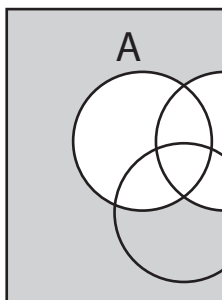
Not a member?
Please sign up to
gain complete
access.

Sign up

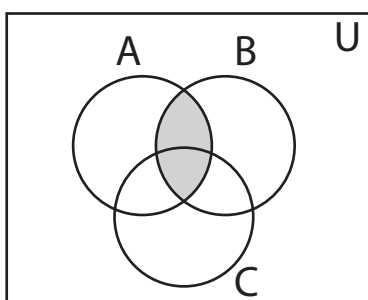
www.mathworksheets4kids.com



5) $B' - A$



7) $A - B'$



8) $B \cup C$

