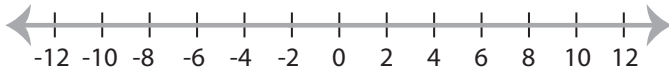


Graphing Compound Inequalities

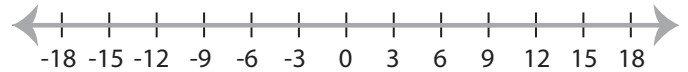
ES3

Graph the compound inequalities.

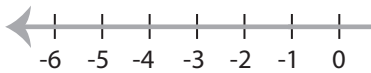
1) $x \leq 8$ and $x > -2$



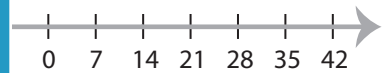
2) $-3 < x < 9$



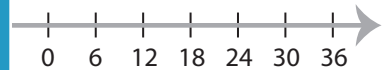
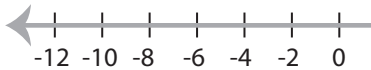
3) $1 \geq x \geq -1$



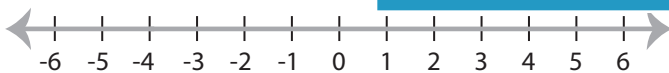
4) $x < 5$



5) $x > 0$ and $x < 6$



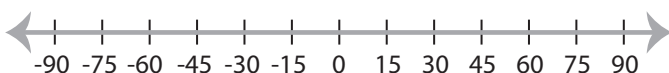
7) $-4 \leq x < 5$



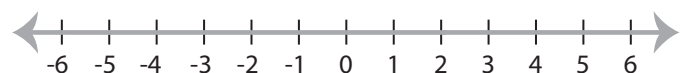
8) $x < -16$



9) $x < 60$ and $x \geq -45$



10) $2 > x > -5$



PREVIEW

Access the largest collection of
worksheets for just **\$19.95** per year!

Members, please
log in to
download this
worksheet.

Log in

Not a member?
Please sign up to
gain complete
access.

Sign up

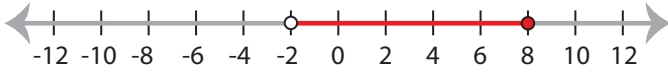
www.mathworksheets4kids.com

Graphing Compound Inequalities

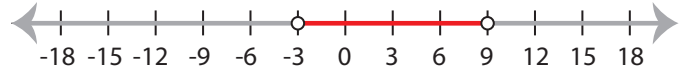
ES3

Graph the compound inequalities.

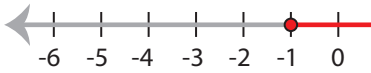
1) $x \leq 8$ and $x > -2$



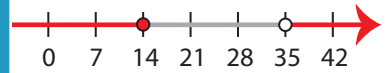
2) $-3 < x < 9$



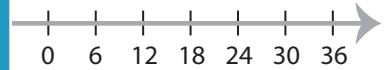
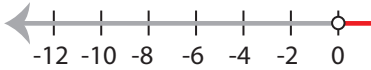
3) $1 \geq x \geq -1$



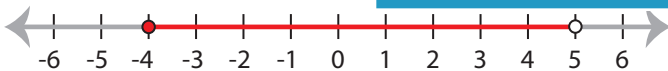
4) $14 \leq x < 35$



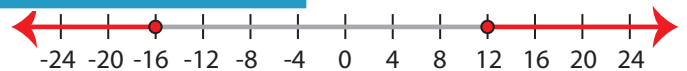
5) $x > 0$ and $x < 6$



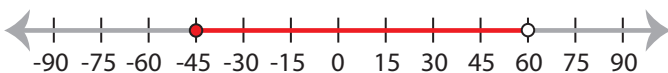
7) $-4 \leq x < 5$



8) $-16 \leq x < 12$



9) $x < 60$ and $x \geq -45$



10) $2 > x > -5$



PREVIEW

Access the largest collection of
worksheets for just **\$19.95** per year!

Members, please
log in to
download this
worksheet.

Log in

Not a member?
Please sign up to
gain complete
access.

Sign up

www.mathworksheets4kids.com