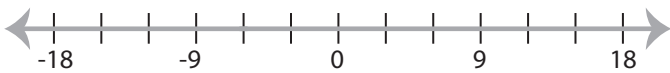


Solving & Graphing Inequalities

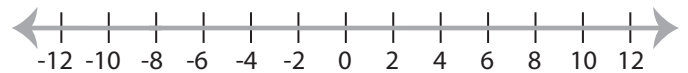
DS3

Solve each inequality and graph the solution.

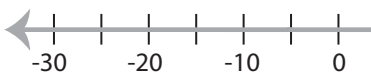
1) $-1 > \frac{x+4}{2}$



2) $-2x + 8 \leq 24$

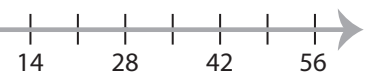


3) $-6x - 13 \geq 17$



PREVIEW

Access the largest collection of
worksheets for just **\$19.95** per year!



Members, please
log in to
download this
worksheet.

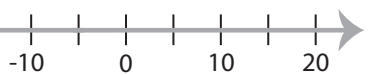
Log in

Not a member?
Please sign up to
gain complete
access.

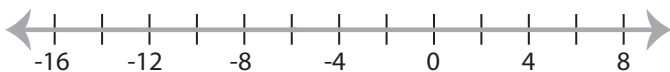
Sign up

www.mathworksheets4kids.com

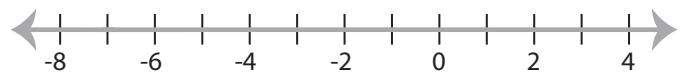
5) $-5x \leq -8x + 21$



7) $-7x - 19 > 23$



8) $-1 < \frac{x+2}{5}$



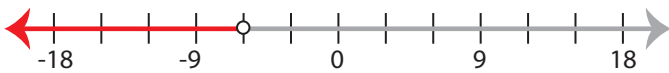
Solving & Graphing Inequalities

DS3

Solve each inequality and graph the solution.

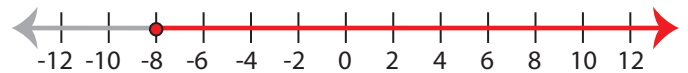
1) $-1 > \frac{x+4}{2}$

$x < -6$



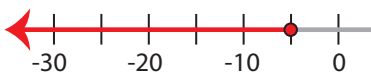
2) $-2x + 8 \leq 24$

$x \geq -8$



3) $-6x - 13 \geq 17$

$x \leq -5$



PREVIEW

Access the largest collection of
worksheets for just **\$19.95** per year!

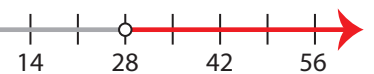
Members, please
log in to
download this
worksheet.

Log in

Not a member?
Please sign up to
gain complete
access.

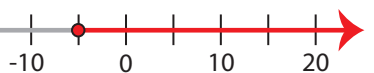
Sign up

www.mathworksheets4kids.com



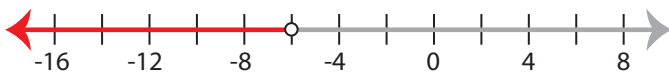
5) $-5x \leq -8x + 21$

$x \leq 7$



7) $-7x - 19 > 23$

$x < -6$



8) $-1 < \frac{x+2}{5}$

$x > -7$

