

Name : \_\_\_\_\_

Score : \_\_\_\_\_

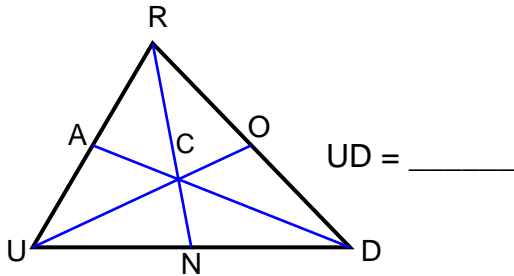
Teacher : \_\_\_\_\_

Date : \_\_\_\_\_

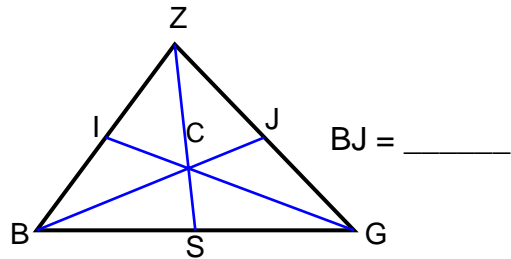
## Triangle Medians

Each triangle shows all three of its medians drawn.

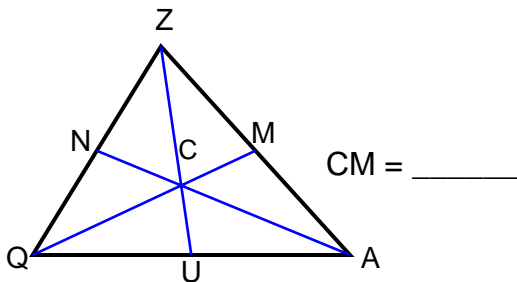
1) Find UD if ND = 10.



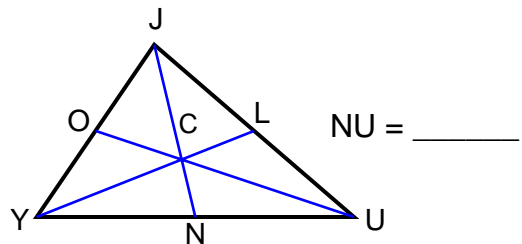
2) CJ = 14. Find BJ.



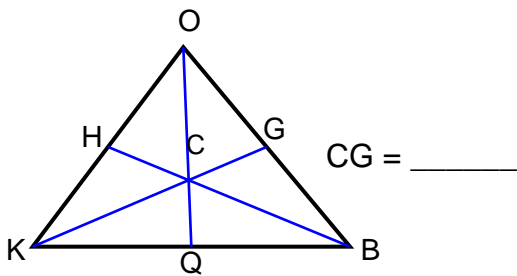
3) QM = 48. Find CM.



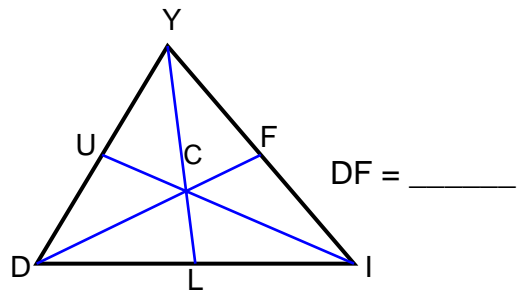
4) Find NU if YU = 14.



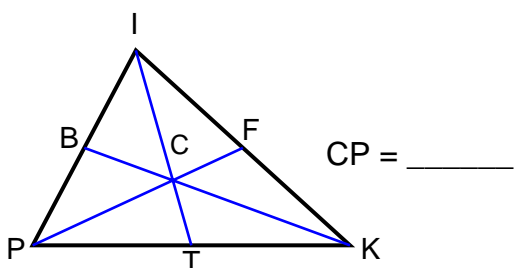
5) KG = 30. Find CG.



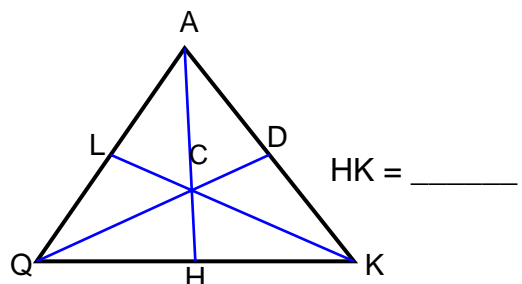
6) CF = 14. Find DF.



7) PF = 42. Find CP.



8) Find HK if QK = 16.



Name : \_\_\_\_\_

Score : \_\_\_\_\_

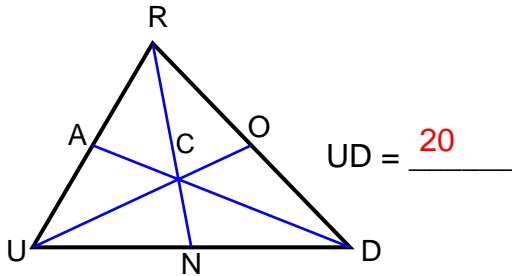
Teacher : \_\_\_\_\_

Date : \_\_\_\_\_

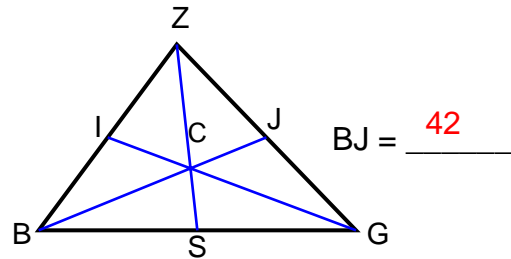
## Triangle Medians

Each triangle shows all three of its medians drawn.

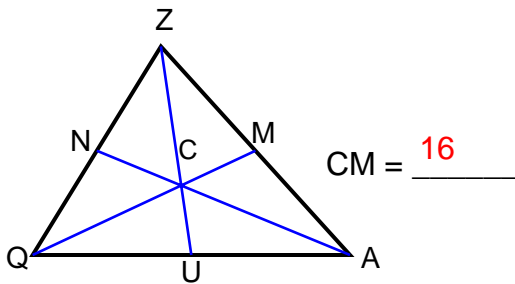
1) Find UD if ND = 10.



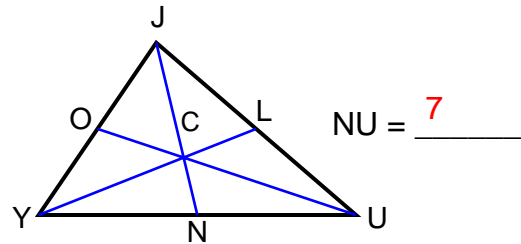
2) CJ = 14. Find BJ.



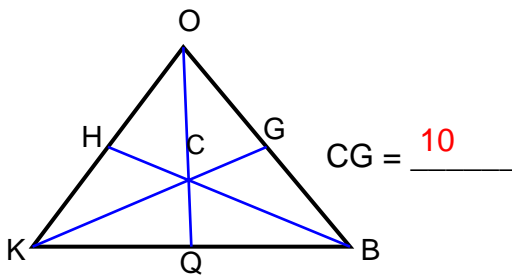
3) QM = 48. Find CM.



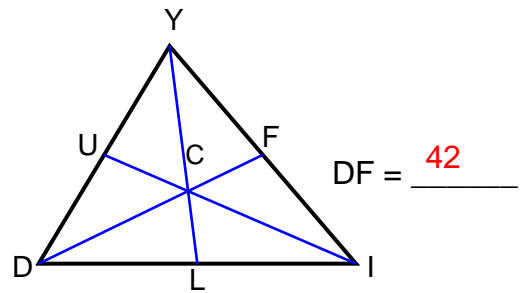
4) Find NU if YU = 14.



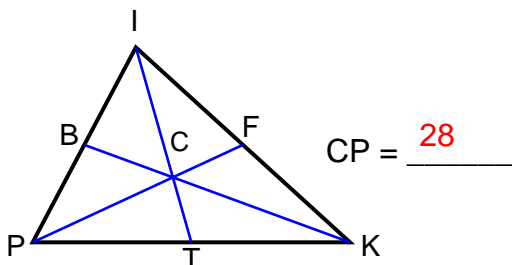
5) KG = 30. Find CG.



6) CF = 14. Find DF.



7) PF = 42. Find CP.



8) Find HK if QK = 16.

