

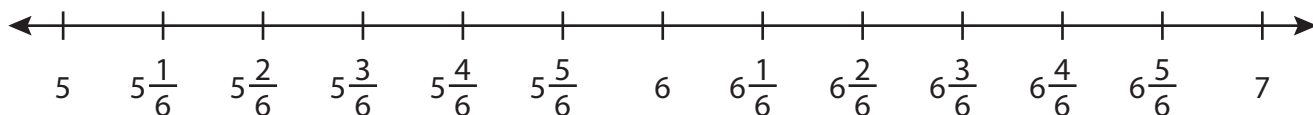
Name : _____

Subtraction using Number Line

Mixed Numbers: S3

Indicate hops on each number line and complete the subtraction sentences.

1) $6\frac{5}{6} - 1\frac{4}{6} =$ _____



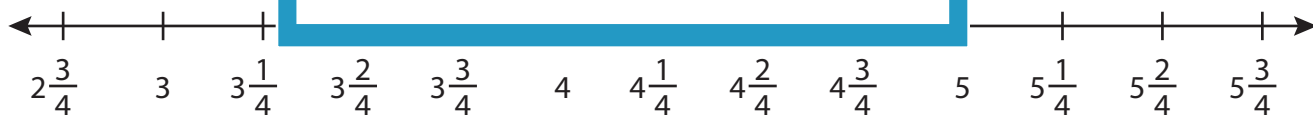
2) $9\frac{1}{3} - 2\frac{2}{3} =$ _____



3) $2\frac{9}{12} - 1\frac{1}{12} =$ _____



4) $5\frac{3}{4} - 2\frac{2}{4} =$ _____



5) $8\frac{1}{2} - 4\frac{1}{2} =$ _____



PREVIEW

Gain complete access to the largest collection of worksheets in all subjects!

Members, please log in to download this worksheet.

Not a member? Please sign up to gain complete access.

www.mathworksheets4kids.com

Name : _____

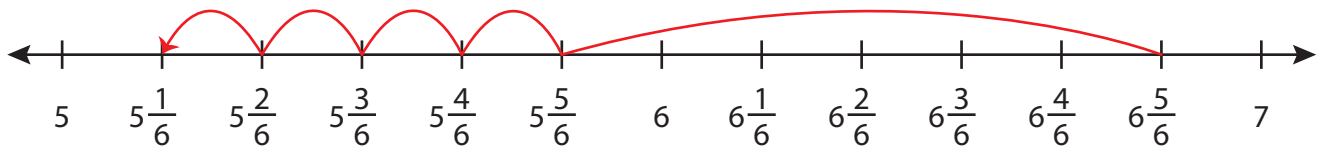
Answer key

Mixed Numbers: S3

Subtraction using Number Line

Indicate hops on each number line and complete the subtraction sentences.

1) $6\frac{5}{6} - 1\frac{4}{6} = \underline{5\frac{1}{6}}$



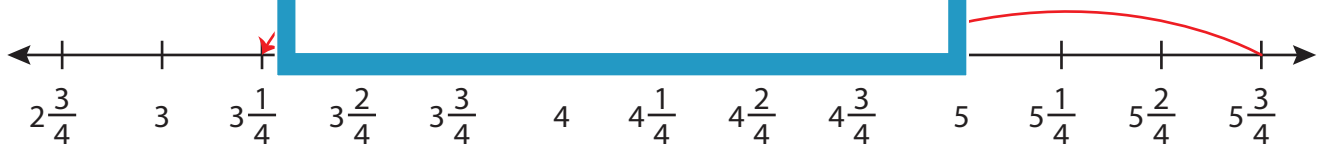
2) $9\frac{1}{3} - 2\frac{2}{3} =$



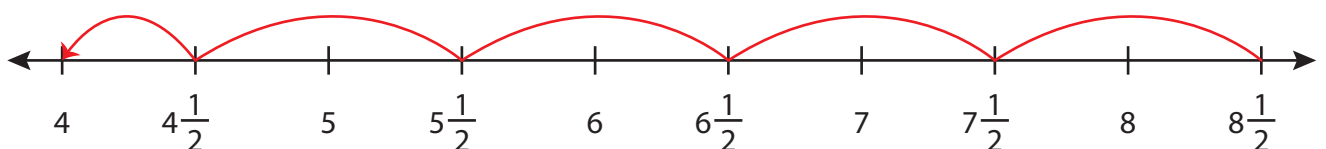
3) $2\frac{9}{12} - 1\frac{1}{12} =$



4) $5\frac{3}{4} - 2\frac{2}{4} =$



5) $8\frac{1}{2} - 4\frac{1}{2} = \underline{4}$



PREVIEW

Gain complete access to the largest collection of worksheets in all subjects!

Members, please log in to download this worksheet.

Not a member? Please sign up to gain complete access.

www.mathworksheets4kids.com