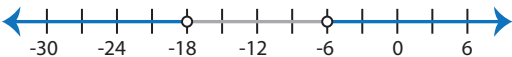
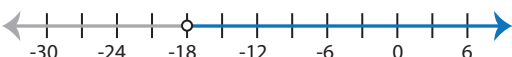
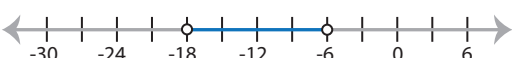



Identifying Graphs

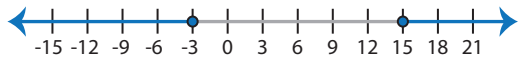
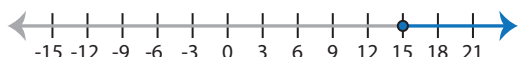

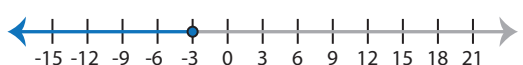
One-step: S1

Choose the correct graph that best describes the solution for each inequality.

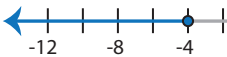
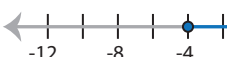
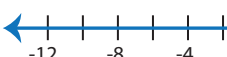
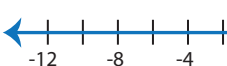
1) $|x + 12| < 6$

- a) 
- b) 
- c) 
- d) 

2) $|x - 6| \geq 9$

- a) 
- b) 
- c) 
- d) 

3) $|7x| \leq 28$

- a) 
- b) 
- c) 
- d) 

PREVIEW

Access the largest collection of
worksheets for just **\$19.95** per year!

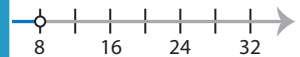


Members, please
log in to
download this
worksheet.

Log in

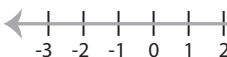


Not a member?
Please sign up to
gain complete
access.

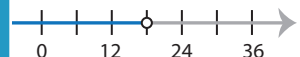
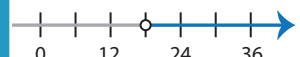
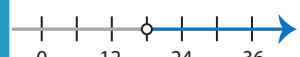
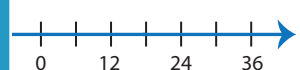
Sign up

www.mathworksheets4kids.com

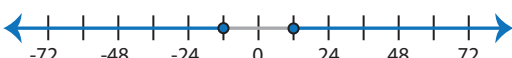
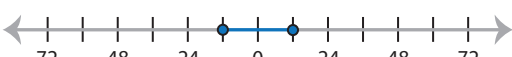
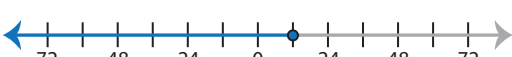

- 
- 
- 

5) $|x - 5| < 2$

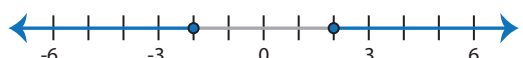
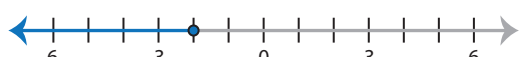
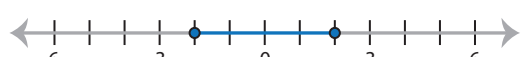
- a) 
- b) 
- c) 
- d) No solution

- 
- 
- 
- 

7) $\frac{|x|}{3} \leq 4$

- a) 
- b) 
- c) 
- d) 

8) $-|9x| \geq 18$

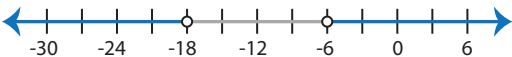
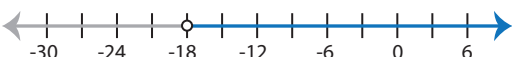
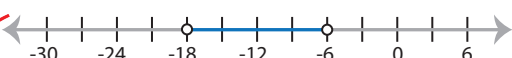

- a) 
- b) 
- c) 
- d) No solution

Identifying Graphs

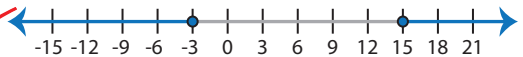
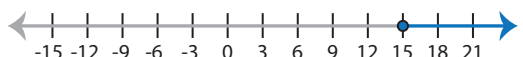

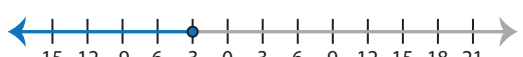
One-step: S1

Choose the correct graph that best describes the solution for each inequality.

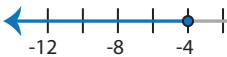
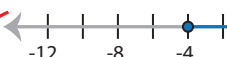
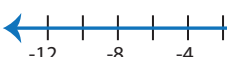
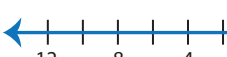
1) $|x + 12| < 6$

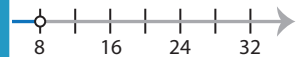


- a) 
- b) 
- c) 
- d) 

2) $|x - 6| \geq 9$

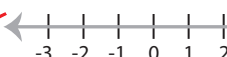
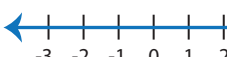

- a) 
- b) 
- c) 
- d) 

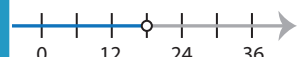
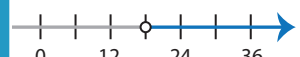
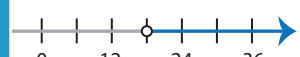

3) $|7x| \leq 28$

- a) 
- b) 
- c) 
- d) 

- 
- 
- 

5) $|x - 5| < 2$

- a) 
- b) 
- c) 
- d) No solution

- 
- 
- 
- 

PREVIEW

Access the largest collection of
worksheets for just **\$19.95** per year!

Members, please
log in to
download this
worksheet.

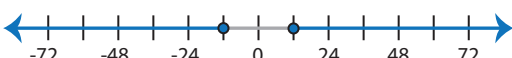
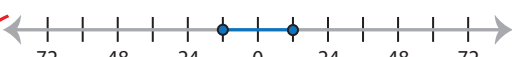
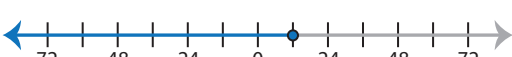
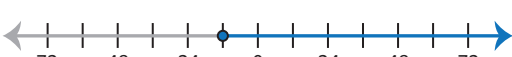
Log in

Not a member?
Please sign up to
gain complete
access.

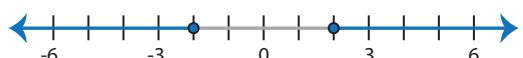
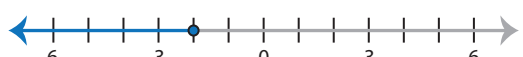
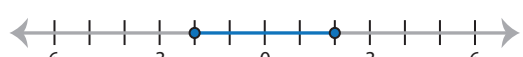
Sign up

www.mathworksheets4kids.com

7) $\frac{|x|}{3} \leq 4$

- a) 
- b) 
- c) 
- d) 

8) $-|9x| \geq 18$

- a) 
- b) 
- c) 
- d) No solution