

# Identifying Graphs

ES3

Choose the correct graph that best describes the solution for each inequality.

1)  $2(9x - 4) \geq 28$

- a)
- b)
- c)
- d)

2)  $16 - \frac{7x}{3} > 11 - 4x$

- a)
- b)
- c)
- d)

3)  $\frac{3x + 2}{8} < 10$

- a)
- b)
- c)
- d)

- a)
- b)
- c)
- d)

5)  $\frac{11x - 5}{4} > 18$

- a)
- b)
- c)
- d)

- a)
- b)
- c)
- d)

# PREVIEW

Access the largest collection of  
worksheets for just **\$19.95** per year!

Members, please  
log in to  
download this  
worksheet.

Log in

Not a member?  
Please sign up to  
gain complete  
access.

Sign up

[www.mathworksheets4kids.com](http://www.mathworksheets4kids.com)

7)  $8(6x + 1) \geq 56$

- a)
- b)
- c)
- d)

8)  $\frac{5x}{3} - x \leq 6$

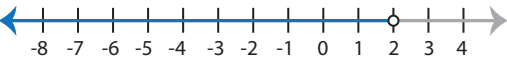
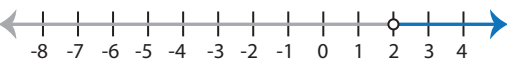
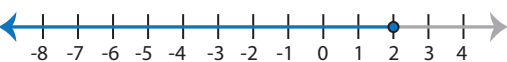
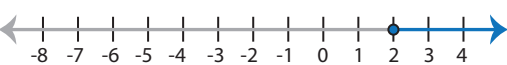
- a)
- b)
- c)
- d)

# Identifying Graphs


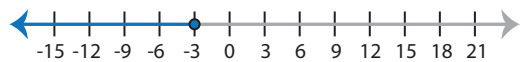
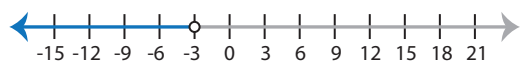

ES3

Choose the correct graph that best describes the solution for each inequality.





1)  $2(9x - 4) \geq 28$



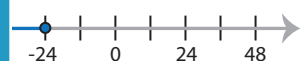
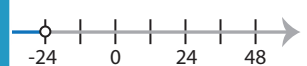
- a) 
- b) 
- c) 
- d) 

2)  $16 - \frac{7x}{3} > 11 - 4x$

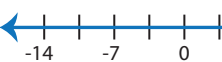
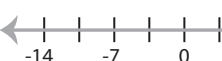
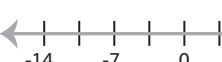

- a) 
- b) 
- c) 
- d) 

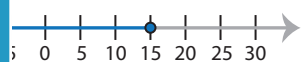



3)  $\frac{3x + 2}{8} < 10$

- a) 
- b) 
- c) 
- d) 

- a) 
- b) 
- c) 
- d) 

5)  $\frac{11x - 5}{4} > 18$

- a) 
- b) 
- c) 
- d) 

- a) 
- b) 
- c) 
- d) 

# PREVIEW

Access the largest collection of worksheets for just **\$19.95** per year!

Members, please log in to download this worksheet.


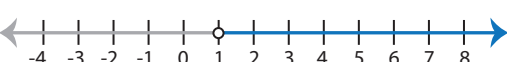
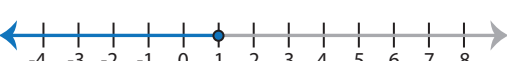

Log in

Not a member? Please sign up to gain complete access.




Sign up

[www.mathworksheets4kids.com](http://www.mathworksheets4kids.com)

7)  $8(6x + 1) \geq 56$

- a) 
- b) 
- c) 
- d) 

8)  $\frac{5x}{3} - x \leq 6$

- a) 
- b) 
- c) 
- d) 