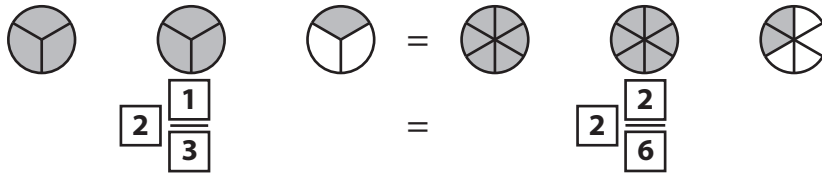


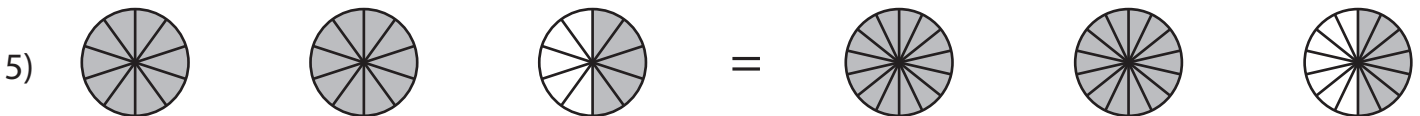
# Equivalent Fractions

Mixed Numbers: S3

Example:



Write the equivalent mixed numbers for the pie models in each problem.



## PREVIEW

Access the largest collection of  
worksheets for just **\$19.95** per year!

Members, please  
log in to  
download this  
worksheet.

Log in

Not a member?  
Please sign up to  
gain complete  
access.

Sign up

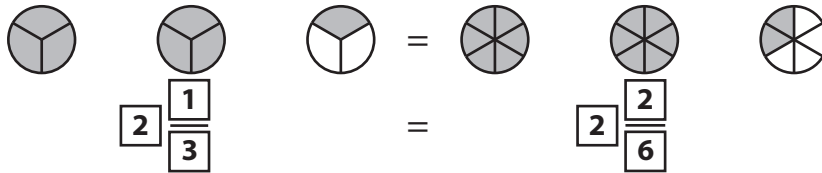
[www.mathworksheets4kids.com](http://www.mathworksheets4kids.com)

# Answer key

## Equivalent Fractions

Mixed Numbers: S3

Example:



Write the equivalent mixed numbers for the pie models in each problem.



2

2

$\frac{3}{9}$



3

3

$\frac{2}{8}$



2

2

$\frac{2}{5}$

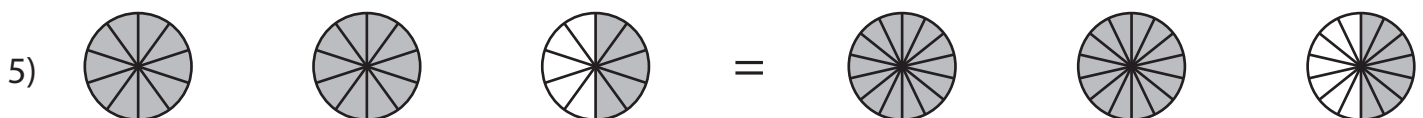


3

3

$\frac{3}{6}$

$\frac{1}{2}$



2

2

$\frac{5}{10}$

$\frac{7}{14}$

# PREVIEW

Access the largest collection of worksheets for just **\$19.95** per year!

Members, please log in to download this worksheet.

Log in

Not a member? Please sign up to gain complete access.

Sign up

www.mathworksheets4kids.com