

DIGITAL TIME



1) Label the picture:



2) What time is it?



it's twelve sixteen



it's nine o' two



it's ten twenty-five



it's eleven thirty



it's three fifty



it's six o'clock

3) Listen and complete

DEPARTURES			
FLIGHT	TIME	DESTINATION	BOARDING GATE
CA 822	10:05	TORONTO	6
BA134	10:20	LONDON	9
QF31	10:30	SYDNEY	2
AA105	10:40	NEW-YORK	11
UA606	11:10	SAN FRANCISCO	13
AL187	11:15	DUBLIN	1

4) Write the time with AM or PM (in numbers)



11:00 pm



04:00 am



11:00 am



04:00 pm



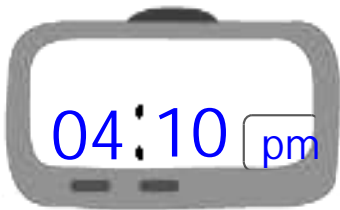
02:00 pm



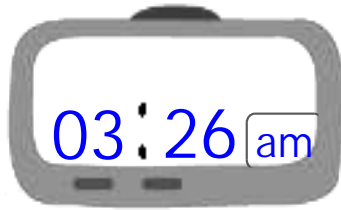
06:00 pm

5) Write the digital time and add AM or PM

Four ten
in the afternoon



Three twenty-six
in the morning




Eleven o' nine
in the evening



6) Be a champ!

Half past seven: N° 8



Twenty-five to three: N° 5



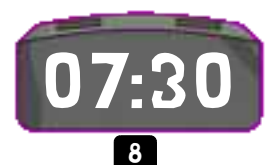

Quarter to ten: N° 3

Quarter past ten: N° 2



Half past six: N° 7

Nine o'clock: N° 1



Twenty-five past three: N° 4

Two to two: N° 6