

DIGITAL TIME



1) Label the picture:



2) What time is it?



3) Listen and complete

✈ DEPARTURES ✈			
FLIGHT	TIME	DESTINATION	BOARDING GATE
CA 822	<input type="text"/>	TORONTO	<input type="text"/>
<input type="text"/>	10:20	<input type="text"/>	9
<input type="text"/>	<input type="text"/>	SYDNEY	2
<input type="text"/>	<input type="text"/>	<input type="text"/>	11
<input type="text"/>	11:10	<input type="text"/>	<input type="text"/>
<input type="text"/>	<input type="text"/>	<input type="text"/>	<input type="text"/>

4) Write the time with AM or PM (in numbers)











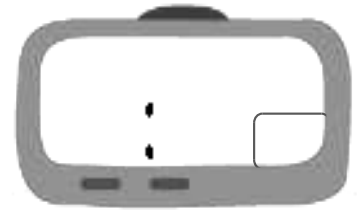
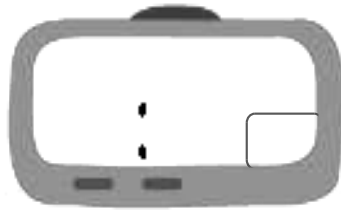
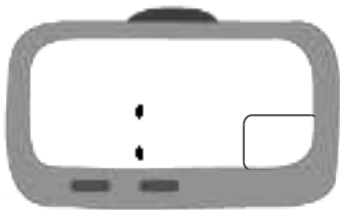


5) Write the digital time and add AM or PM

Four ten
in the afternoon

Three twenty-six
in the morning

Eleven o' nine
in the evening



6) Be a champ!

Half past seven: N° ____



1

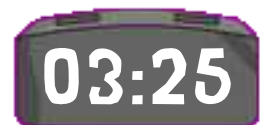


2

Twenty-five to three: N° ____



3

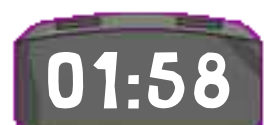


4

Quarter to ten: N° ____



5

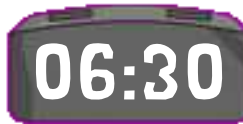


6

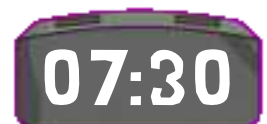
Half past six: N° ____

Nine o'clock: N° ____

Twenty-five past three: N° ____



7



8

Two to two: N° ____