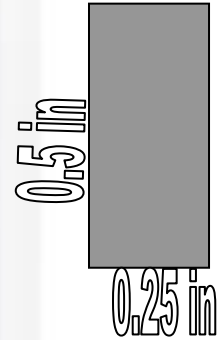

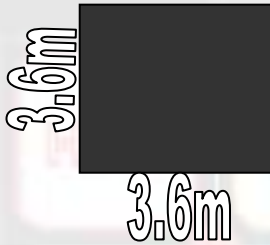


## TOPIC QUIZ

### Perimeter and Area - VERSION 2

Find the following perimeters (P) and areas (A) for the following shapes



1) P=

2) P=

3) P=

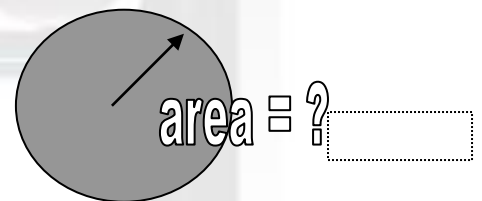
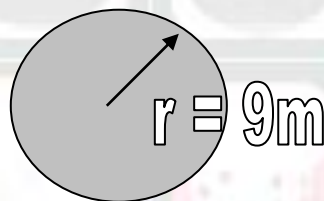
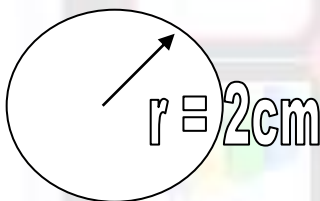
4) A=

5) A=

6) A=

Find the perimeter (C=circumference) or the areas as stated, of the following circular shapes.

**Circumference =  $2 \pi r$  Area =  $\pi r^2$  (use  $\pi$  as 3)**

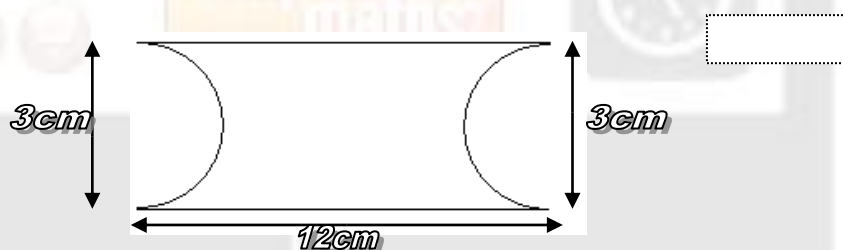


7) C=

8) A=

9) C= 20cm

10) What is the area of the following shape?



How well did you do??

Score (out of ten)