


Calculating Perimeters

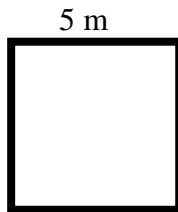
Squares

Look at the diagrams and answer the following questions

- 1) State the perimeter of the following squares. (each square not shown to scale!)



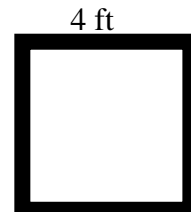
.....



.....

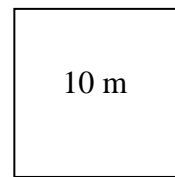
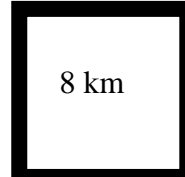
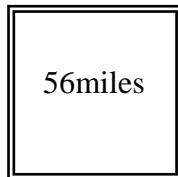
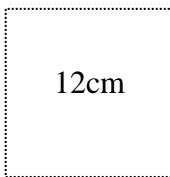


.....



.....

- 2) State the length of each side of the following squares given the perimeter as shown.



- 3) A farmer has twenty four meters of fencing left over and wants to create a pen for his pigs. What dimensions would the fencing have if the farmer wants it to be in a square shape?

.....

