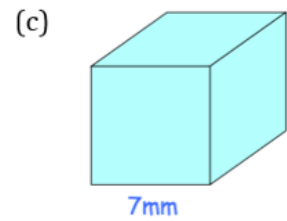
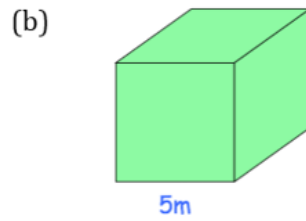
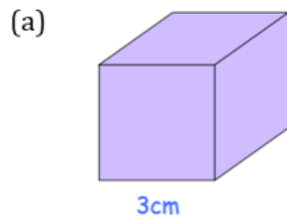


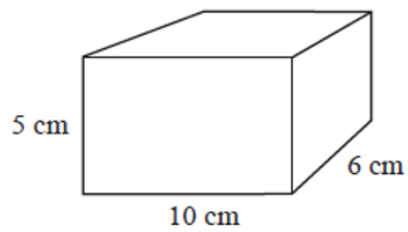
Volume of cubes and cuboids

Target Source..... Name.....

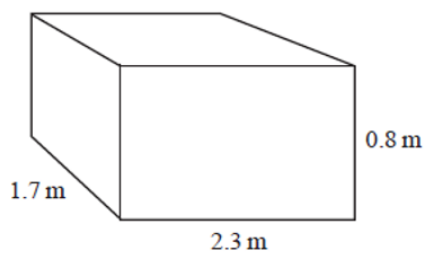
1. Work out the volume of each cube.



2. Find the volume of this cuboid.

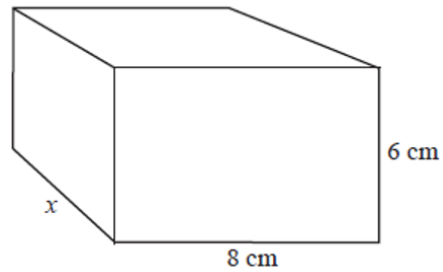


3. Find the volume of this cuboid.



Volume of cubes and cuboids

4. The volume of this cuboid is 480 cm^3 .
Find the length of the side marked x .



5. Boxes A and B are both cuboids.
How many of box B could be packed into box A .

