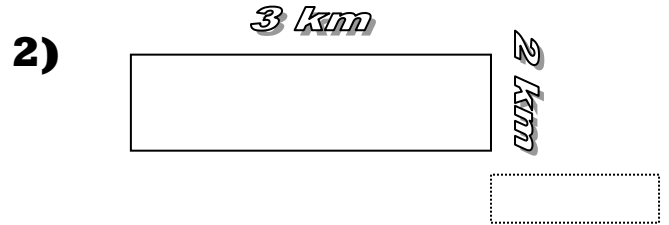
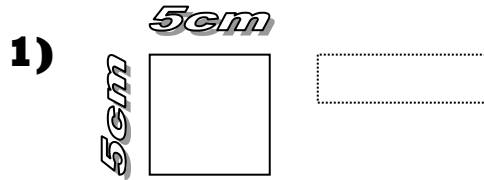


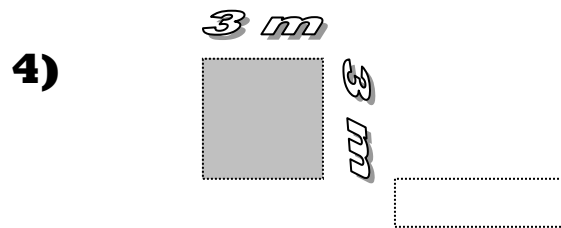
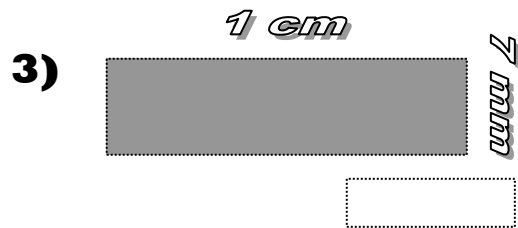
TOPIC QUIZ

Perimeter and Area - VERSION 2

Find the perimeter of the following shapes



Find the area of the following shapes



Find the missing numbers etc, in the table below

Shape	width	length	Perimeter	Area
5) Square	10cm	10cm	100cm ²
6) Rectangle	7 m	32 m	63 m ²
7)	8cm	15cm	46cm

8) What area is taken up by a swimming pool measuring 30m by 9.5m ?

9) A garden is 20m long and has a perimeter fence 64m around it. What is the width of the garden?

10) What is the area of concrete required for a runway 50m wide and 1km long ?



How well did you do??

Score (out of ten)