

# Number

- Read, write, order and compare large numbers (up to one million)
- Recognise and use positive and negative numbers

Probability recap



# Place Value

Simone converts UK currency to South Korean currency.

Write the value of the unlined number, the first one has been done for you

UK Sterling	South Korean Won	Value
£1	1 <u>4</u> 22.49	400
£50	711 <u>2</u> 4.5	
£100	<u>1</u> 42249	
£150	12 <u>3</u> 373.5	
£650	<u>9</u> 24618.5	

Reorder these distances starting with the largest.

- 128,000m
- 80,000m
- 75,000m
- 64,000m
- 93,000m
- 121,000m
- 85,000m
- 174,000m

Circle the numbers that are less than one hundred thousand

- 128,000m
- 80,000m
- 75,000m
- 64,000m
- 93,000m
- 121,000m
- 85,000m
- 174,000m

Write these numbers in words

- 420,240

- 402,240

- 2,424

- 2,244

- 2,442

Fill in the table below so that the amounts are shown in numbers and words

Numbers	Words
	Twenty thousand
32,000	
	Sixty eight thousand
	Forty one thousand
62,015	

Complete the table so the statements are true

Numbers	< = >	
£345		Three hundred pounds
£456		Four hundred and seventy pounds
£672		Six hundred and seventy two pounds
£569		Five hundred and nineteen pounds
£657		Six hundred and fifty eight pounds

Look at the table below:

Accommodation	Prices per night
Grand Hotel	> £90
Station Hotel	< £25
International Hotel	> £25

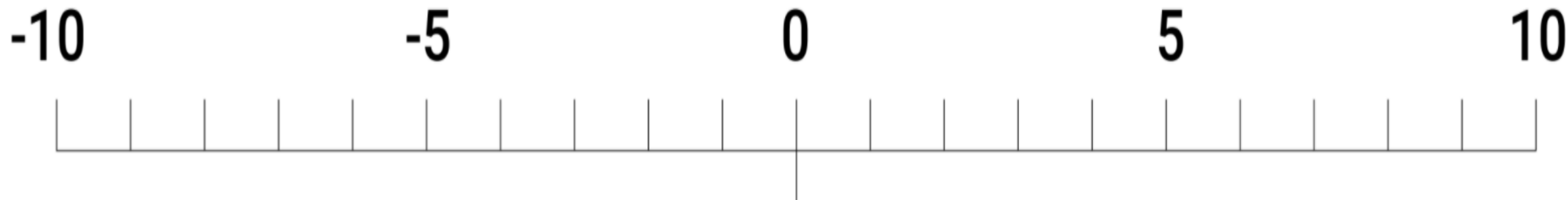
Which hotel has a room for less than £25 per night?

(1)

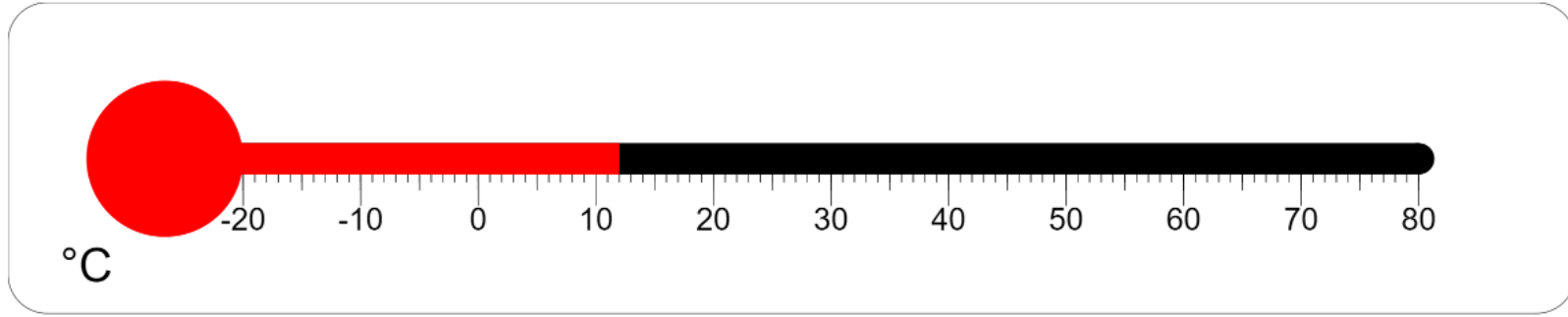
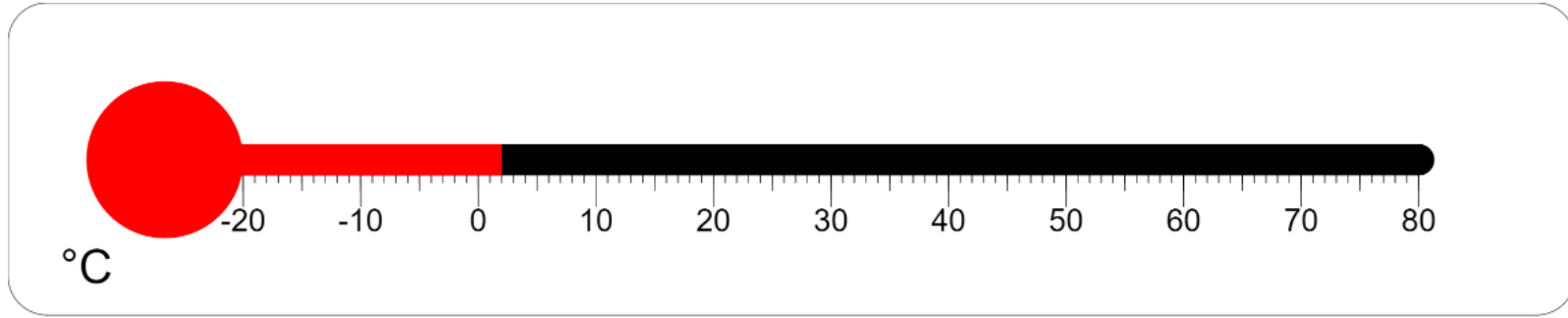
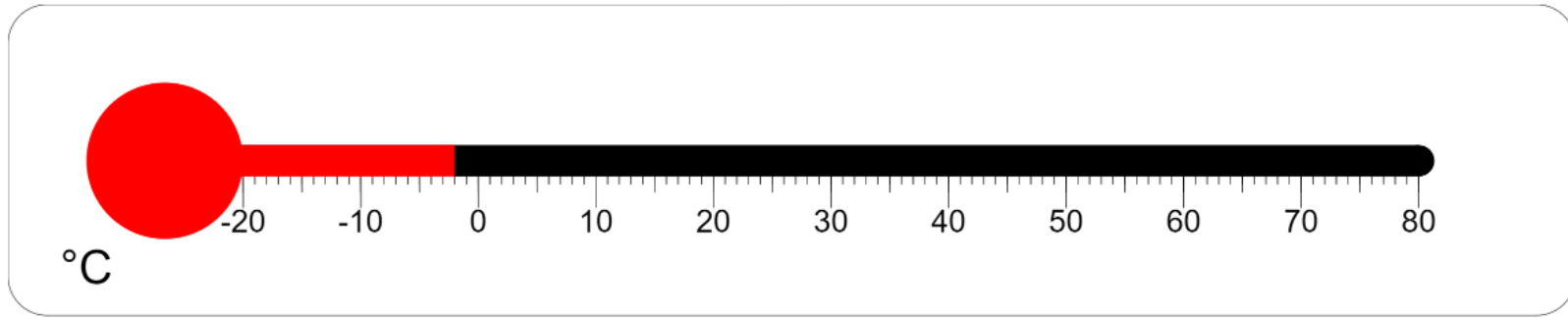
- The table shows the bank balance of three friends.

Emily	Jake	Pablo
-£101	£1	-£11

- Who has the most money?
- Who has the least money?



- The difference between 8 and -1 is?
- The difference between 6 and -3 is?
- The difference between -3 and 4 is?
- The difference between -2 and 2 is?
- The difference between -1 and -4 is?



Label the temperature on each thermometer.

(3)

• Which number is 3 more than -2?

-5   -1   1   -2

• Which number is 4 less than 1?

3   -3   5   -5

• Which number is 6 more than - 8?

-14   -2   2   14

• Which number is 3 less than -8?

-11   -5   5   11

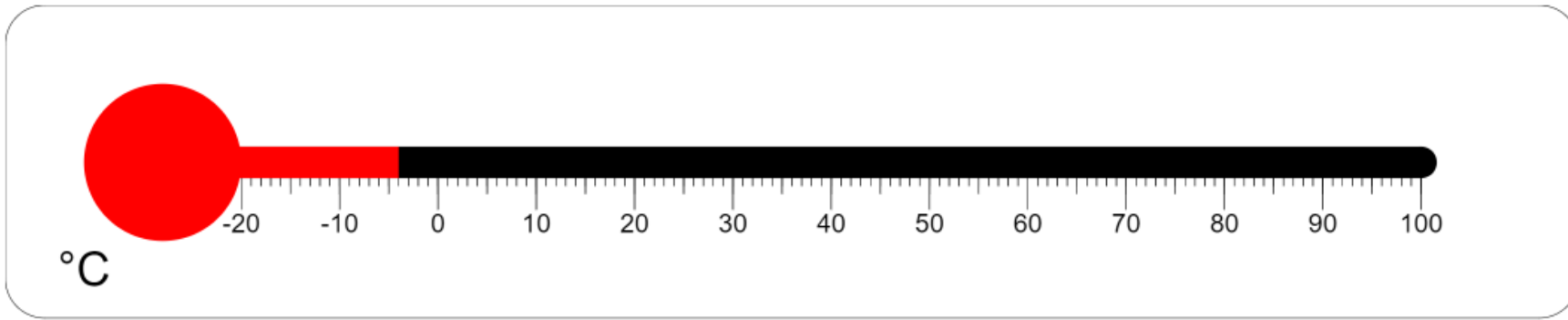
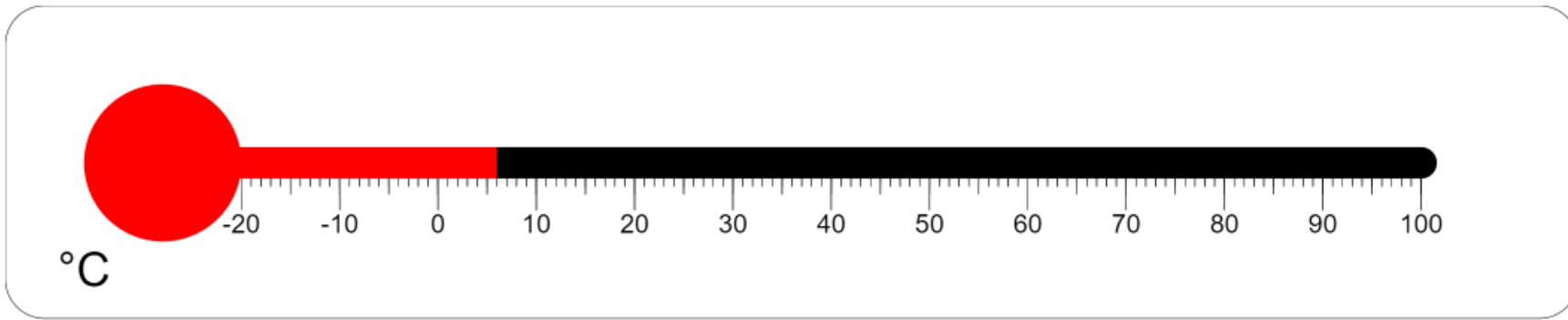
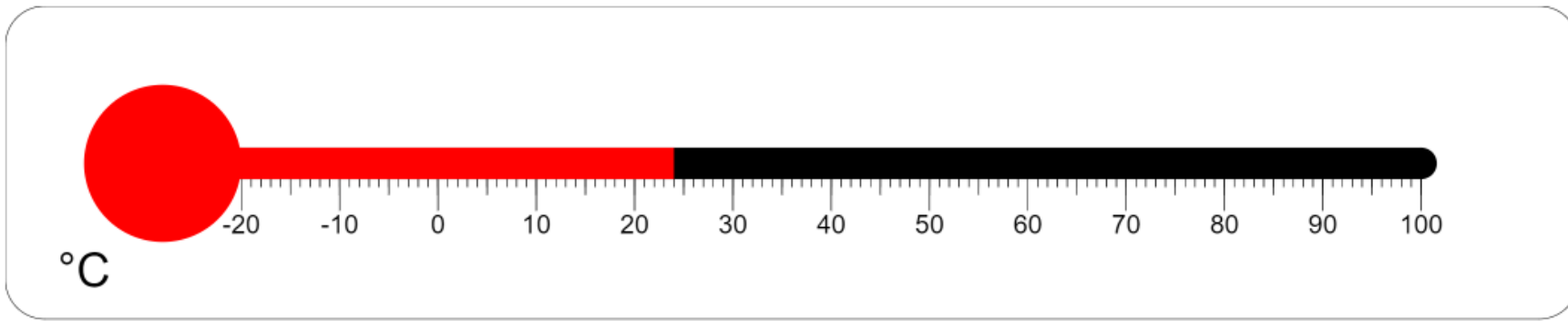
Which number is 4 more than -5?

-9   -1   1   9

Put the temperatures in order from the coldest to the warmest.

	Coldest
3	
-4	
1	
0	
-1	
-3	
	Warmest

(3)



Label the temperature on each thermometer.

(3)

What is the difference between the coldest and warmest temperatures?

(1)

Work out

$$8 - 16 =$$

$$-16 + 18 =$$

$$-10 - 12 =$$

$$-3 - 5 =$$

$$-5 + 3 =$$

- Score \_\_\_\_/55