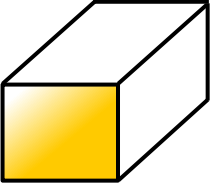




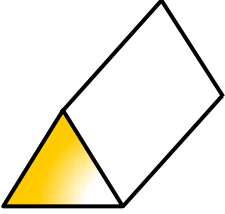
1) 

Name _____

Vertices _____

Faces _____

Edges _____


2) 

Name _____

Vertices _____

Faces _____

Edges _____

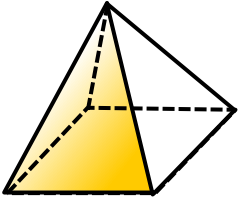
3) 

Name _____

Vertices _____

Faces _____

Edges _____

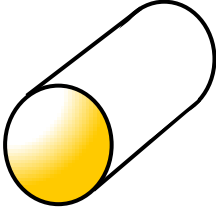
4) 

Name _____

Vertices _____

Faces _____

Edges _____

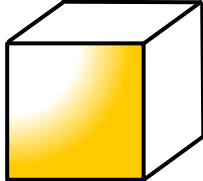
5) 

Name _____

Vertices _____

Faces _____

Edges _____


6) 

Name _____

Vertices _____

Faces _____

Edges _____

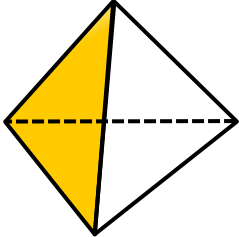
7) 

Name _____

Vertices _____

Faces _____

Edges _____

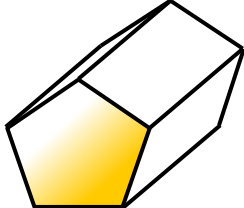
8) 

Name _____

Vertices _____

Faces _____

Edges _____

9) 

Name _____


Vertices _____

Faces _____

Edges _____

Extension

Shapes A and B are types of prisms and shape C is a type of pyramid. Work out what shapes they are.


A) 

Name _____

Vertices **12**

Faces **8**

Edges **18**


B) 

Name _____

Vertices **16**

Faces **10**

Edges **24**

C) 

Name _____

Vertices **6**

Faces **6**

Edges **10**